


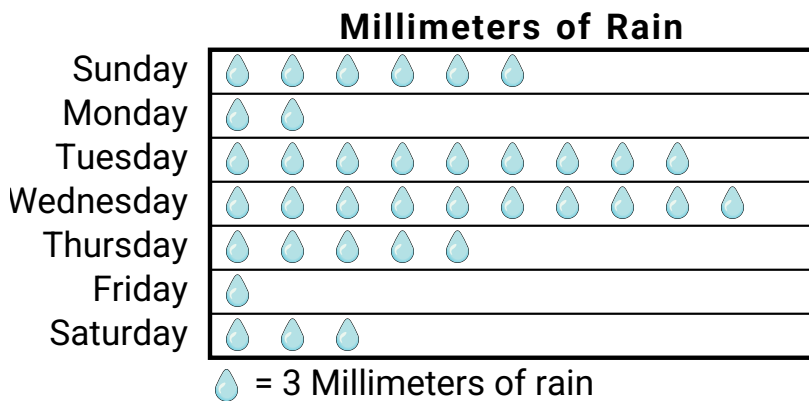


Roger was recording how many slam dunks his favorite teams scored. He organized the information in the pictograph below.



- 1) Which team had the largest number of slam dunks?
- 2) Which team scored exactly 32 slam dunks?
- 3) Which team had more slam dunks, Rockets or Grizzlies?
- 4) How many slam dunks did the Celtics make?
- 5) Which team had the fewest number of slam dunks?

Mr. Sanders class was performing an experiment to see which day of the week had the most rain. His class recorded their information in the pictograph below.




- 6) Which day was there exactly 30 millimeters of rain?
- 7) Which day had the least rain?
- 8) How much rain was there on Tuesday?
- 9) Which day had the most rain?
- 10) Did it rain more on Sunday or Monday?

**Answers**

1. \_\_\_\_\_
2. \_\_\_\_\_
3. \_\_\_\_\_
4. \_\_\_\_\_
5. \_\_\_\_\_
6. \_\_\_\_\_
7. \_\_\_\_\_
8. \_\_\_\_\_
9. \_\_\_\_\_
10. \_\_\_\_\_

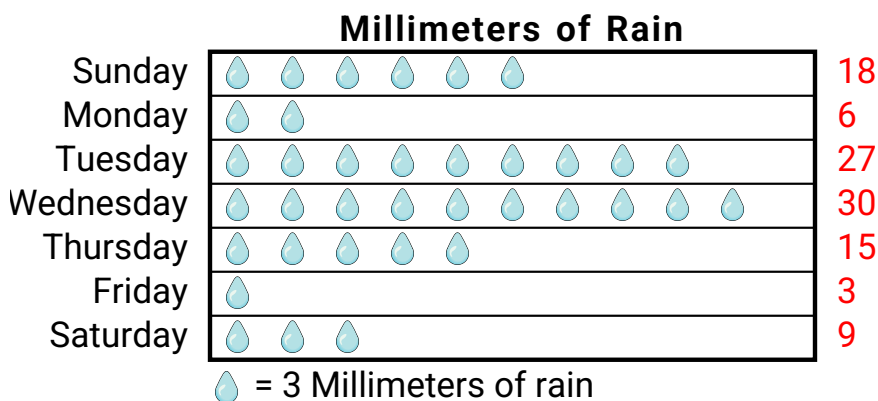


Roger was recording how many slam dunks his favorite teams scored. He organized the information in the pictograph below.



- 1) Which team had the largest number of slam dunks?
- 2) Which team scored exactly 32 slam dunks?
- 3) Which team had more slam dunks, Rockets or Grizzlies?
- 4) How many slam dunks did the Celtics make?
- 5) Which team had the fewest number of slam dunks?

Mr. Sanders class was performing an experiment to see which day of the week had the most rain. His class recorded their information in the pictograph below.



- 6) Which day was there exactly 30 millimeters of rain?
- 7) Which day had the least rain?
- 8) How much rain was there on Tuesday?
- 9) Which day had the most rain?
- 10) Did it rain more on Sunday or Monday?

**Answers**1. **Grizzlies**2. **Bulls**3. **Grizzlies**4. **16**5. **Pistons**6. **Wednesday**7. **Friday**8. **27**9. **Wednesday**10. **Sunday**