






Dave and his friends were trying to see who could catch the most bugs in a day. They recorded their information in the pictograph below.

Bug Catching Contest = 4 Bugs

- 1) Who caught the fewest number of bugs?
- 2) Who caught more bugs, Cody or Sam?
- 3) Who caught exactly 36 bugs?
- 4) How many bugs did Kaleb catch?
- 5) Who caught the greatest number of bugs?

Several students were helping to decorate the school halls by drawing pictures to hang up. The pictograph below shows the number of pictures each student drew.

Pictures Drawn = 7 pictures drawn

- 6) Who drew the fewest pictures?
- 7) Did Adam or Nancy draw more pictures?
- 8) Who drew the most pictures?
- 9) Who drew exactly 49 pictures?
- 10) How many pictures did Isabel draw?

Answers

1. _____
2. _____
3. _____
4. _____
5. _____
6. _____
7. _____
8. _____
9. _____
10. _____




Dave and his friends were trying to see who could catch the most bugs in a day. They recorded their information in the pictograph below.

Bug Catching Contest = 4 Bugs

- 1) Who caught the fewest number of bugs?
- 2) Who caught more bugs, Cody or Sam?
- 3) Who caught exactly 36 bugs?
- 4) How many bugs did Kaleb catch?
- 5) Who caught the greatest number of bugs?

Several students were helping to decorate the school halls by drawing pictures to hang up. The pictograph below shows the number of pictures each student drew.

Pictures Drawn = 7 pictures drawn

- 6) Who drew the fewest pictures?
- 7) Did Adam or Nancy draw more pictures?
- 8) Who drew the most pictures?
- 9) Who drew exactly 49 pictures?
- 10) How many pictures did Isabel draw?

Answers

1. **John**
2. **Sam**
3. **Kaleb**
4. **36**
5. **Kaleb**
6. **Nancy**
7. **Adam**
8. **Isabel**
9. **Sam**
10. **70**