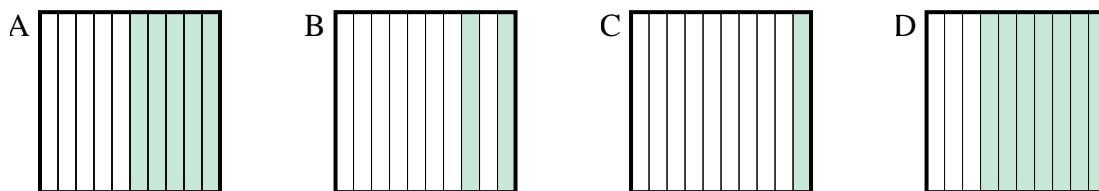
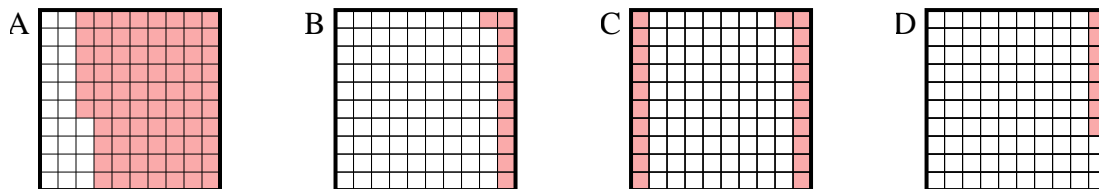


**Determine which letter best answer the question.****Answers**

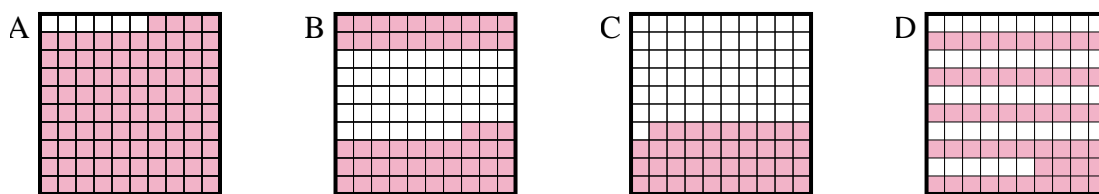
- 1) Which 10×1 grid is shaded to represent the decimal number that, when added to 0.3, results in a total of 1.00?



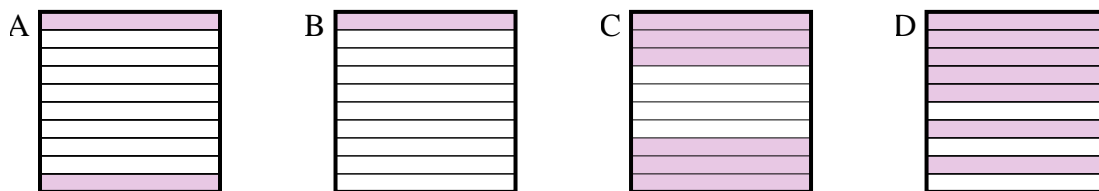
- 2) Which 10×10 grid is shaded to represent the decimal number that, when added to 0.24, results in a total of 1.00?



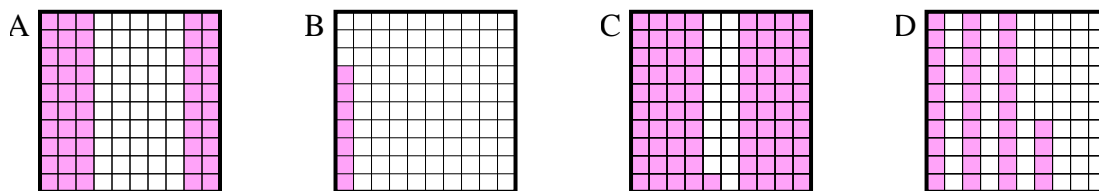
- 3) Which 10×10 grid is shaded to represent the decimal number that, when added to 0.46, results in a total of 1.00?



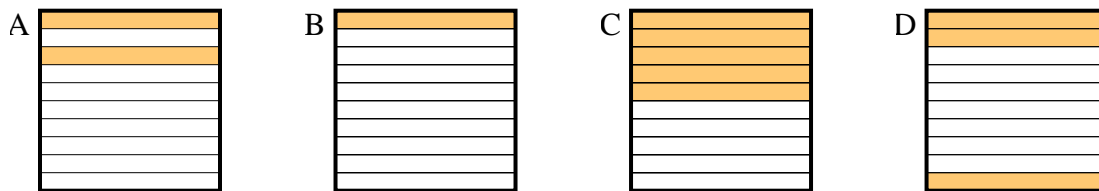
- 4) Which 10×1 grid is shaded to represent the decimal number that, when added to 0.4, results in a total of 1.00?



- 5) Which 10×10 grid is shaded to represent the decimal number that, when added to 0.93, results in a total of 1.00?



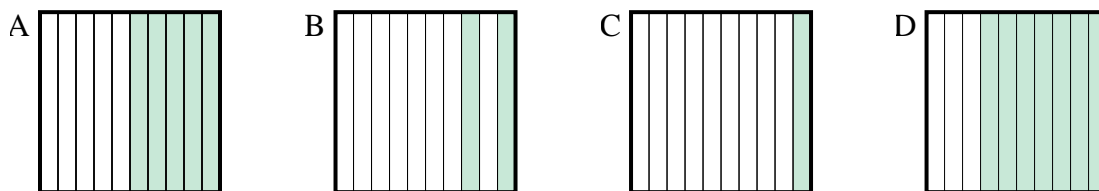
- 6) Which 10×1 grid is shaded to represent the decimal number that, when added to 0.8, results in a total of 1.00?



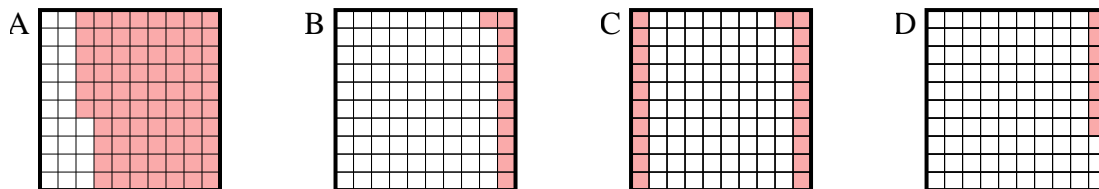
1. _____
2. _____
3. _____
4. _____
5. _____
6. _____

**Determine which letter best answer the question.****Answers**

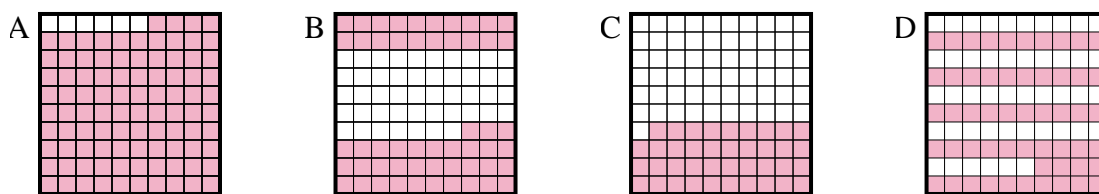
- 1) Which 10×1 grid is shaded to represent the decimal number that, when added to 0.3, results in a total of 1.00?

1. **D**

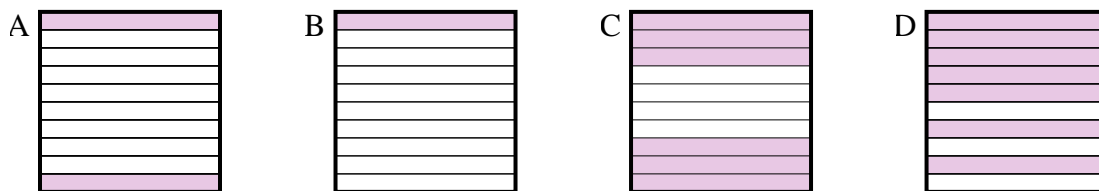
- 2) Which 10×10 grid is shaded to represent the decimal number that, when added to 0.24, results in a total of 1.00?

2. **A**3. **D**4. **C**

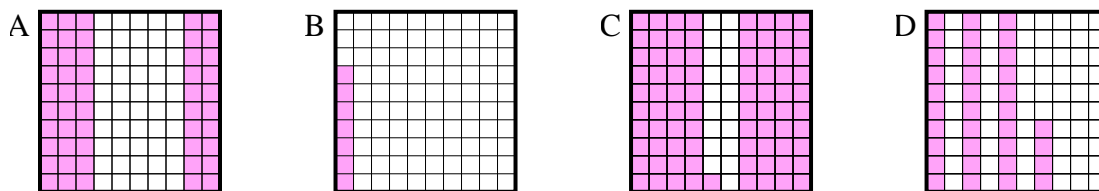
- 3) Which 10×10 grid is shaded to represent the decimal number that, when added to 0.46, results in a total of 1.00?

5. **B**6. **A**

- 4) Which 10×1 grid is shaded to represent the decimal number that, when added to 0.4, results in a total of 1.00?



- 5) Which 10×10 grid is shaded to represent the decimal number that, when added to 0.93, results in a total of 1.00?



- 6) Which 10×1 grid is shaded to represent the decimal number that, when added to 0.8, results in a total of 1.00?

