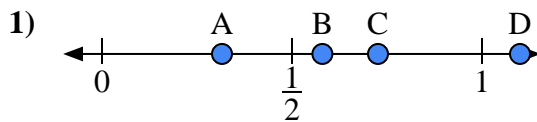
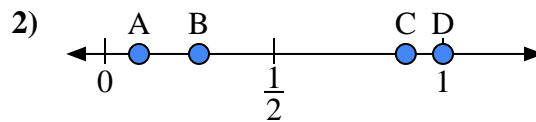




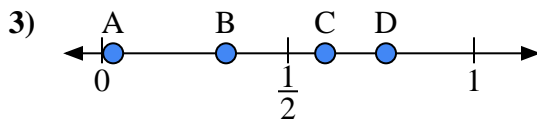
Use the number lines to answer the questions.

Answers

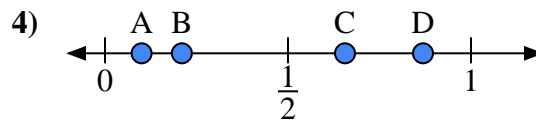
- a) Which letter best represents the location of 1.1?
- b) Which letter best represents the location of 0.58?



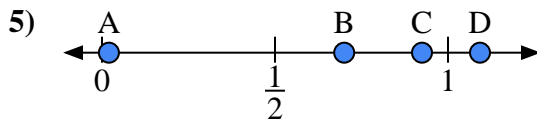
- a) Which letter best represents the location of 1.0?
- b) Which letter best represents the location of 0.89?



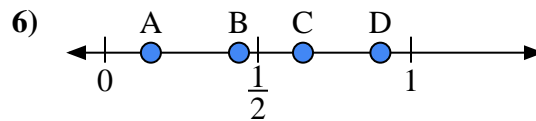
- a) Which letter best represents the location of 0.60?
- b) Which letter best represents the location of 0.03?



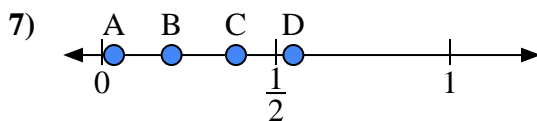
- a) Which letter best represents the location of 0.10?
- b) Which letter best represents the location of 0.21?



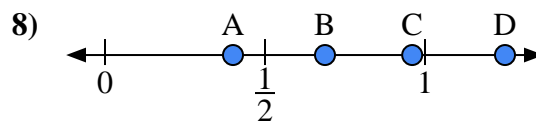
- a) Which letter best represents the location of 0.70?
- b) Which letter best represents the location of 0.02?



- a) Which letter best represents the location of 0.9?
- b) Which letter best represents the location of 0.15?



- a) Which letter best represents the location of 0.2?
- b) Which letter best represents the location of 0.55?

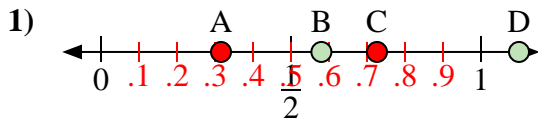


- a) Which letter best represents the location of 0.40?
- b) Which letter best represents the location of 0.96?

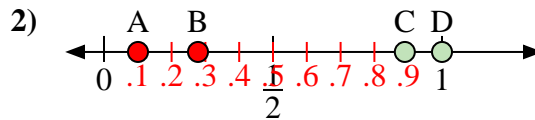
1. _____
2. _____
3. _____
4. _____
5. _____
6. _____
7. _____
8. _____



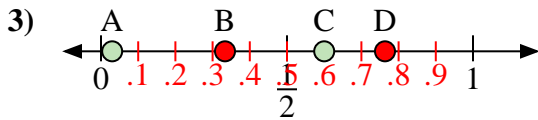
Use the number lines to answer the questions.



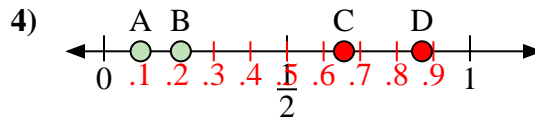
- a) Which letter best represents the location of 1.1?
- b) Which letter best represents the location of 0.58?



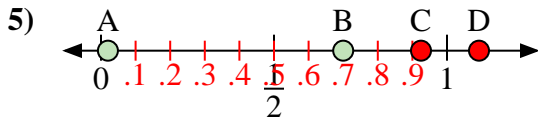
- a) Which letter best represents the location of 1.0?
- b) Which letter best represents the location of 0.89?



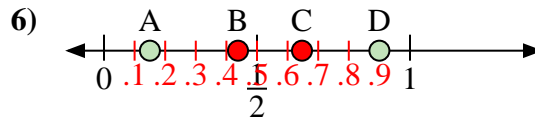
- a) Which letter best represents the location of 0.60?
- b) Which letter best represents the location of 0.03?



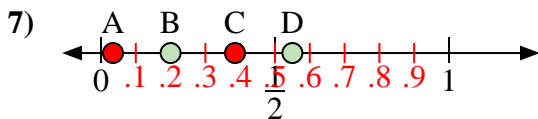
- a) Which letter best represents the location of 0.10?
- b) Which letter best represents the location of 0.21?



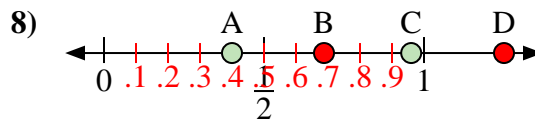
- a) Which letter best represents the location of 0.70?
- b) Which letter best represents the location of 0.02?



- a) Which letter best represents the location of 0.9?
- b) Which letter best represents the location of 0.15?



- a) Which letter best represents the location of 0.2?
- b) Which letter best represents the location of 0.55?



- a) Which letter best represents the location of 0.40?
- b) Which letter best represents the location of 0.96?

Answers

1. D B
2. D C
3. C A
4. A B
5. B A
6. D A
7. B D
8. A C