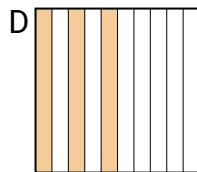
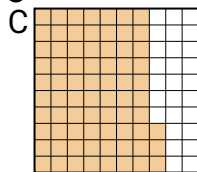
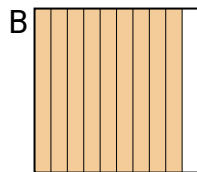
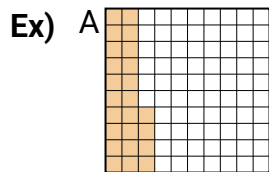




Ordering Decimal Visually

Name: _____

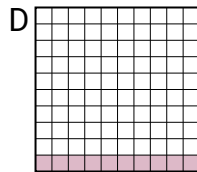
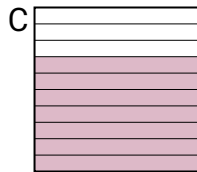
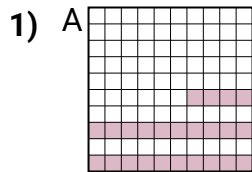
Put the boxes in order from least to greatest based on the shaded amount.



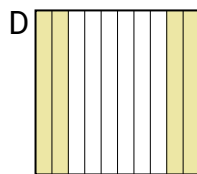
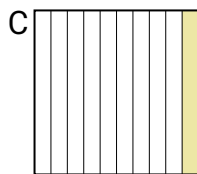
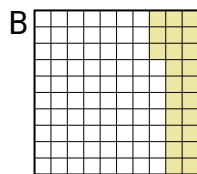
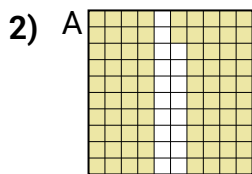
small 0.24 - A
0.3 - D
0.73 - C
large 0.9 - B

Answers

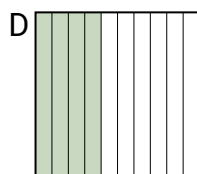
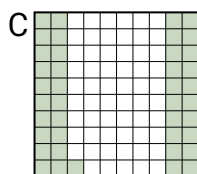
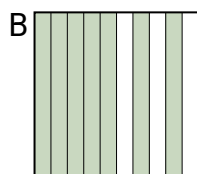
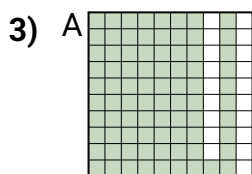
Ex. A D C B



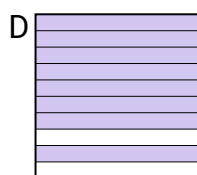
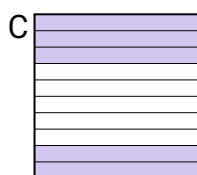
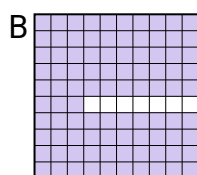
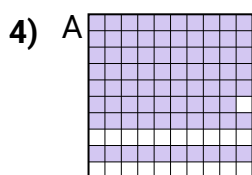
small _____
large _____



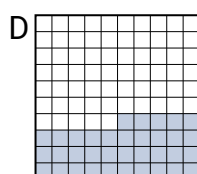

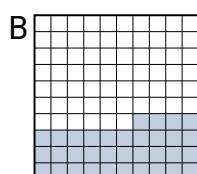
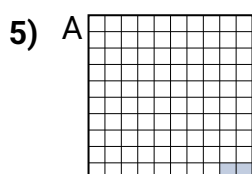
small _____
large _____



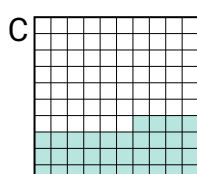

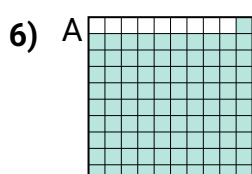
small _____
large _____



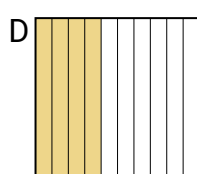
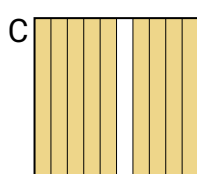
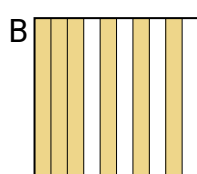
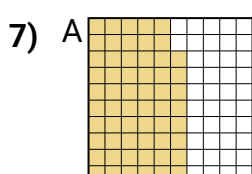
small _____
large _____



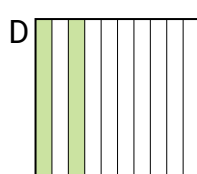
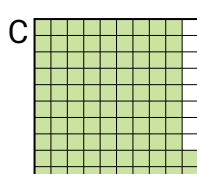
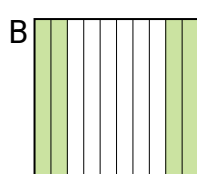
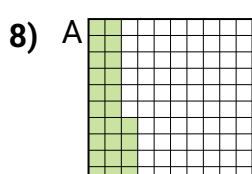
small _____
large _____



small _____
large _____



small _____
large _____



small _____
large _____

1. _____

2. _____

3. _____

4. _____

5. _____

6. _____

7. _____

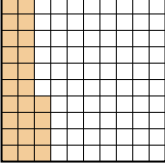
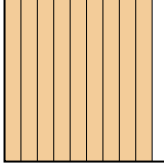
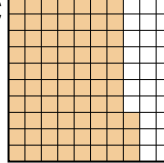
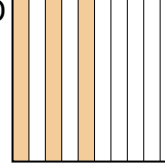
8. _____

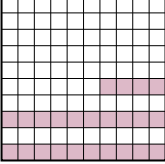


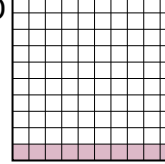


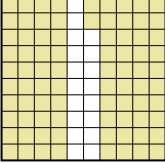
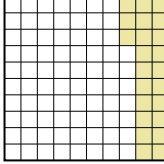

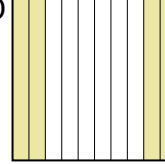
Ordering Decimal Visually

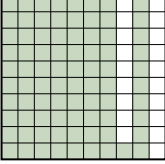
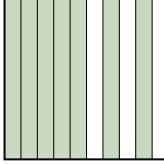
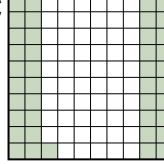
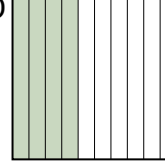
Name: **Answer Key**

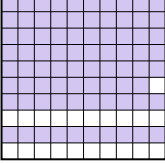
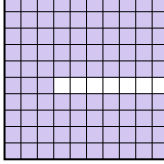


Put the boxes in order from least to greatest based on the shaded amount.

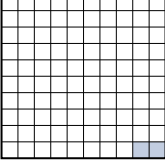
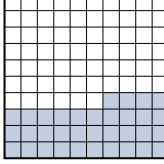

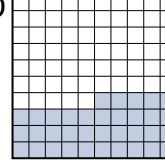
Ex) A  B  C  D  small $\frac{0.24}{0.3} - A$
 $\frac{0.73}{0.9} - D$
large $\frac{0.9}{0.7} - B$

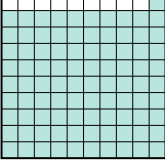

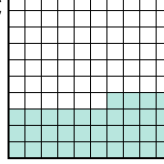

1) A  B  C  D  small $\frac{0.1}{0.1} - B$
 $\frac{0.24}{0.7} - A$
large $\frac{0.7}{0.1} - C$



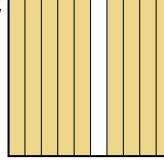
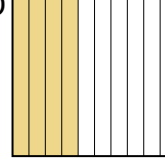
2) A  B  C  D  small $\frac{0.1}{0.23} - C$
 $\frac{0.4}{0.82} - D$
large $\frac{0.82}{0.4} - A$

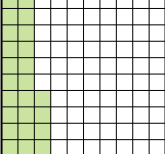

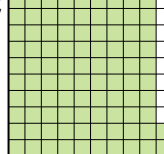

3) A  B  C  D  small $\frac{0.4}{0.41} - D$
 $\frac{0.7}{0.81} - B$
large $\frac{0.81}{0.7} - A$

4) A  B  C  D  small $\frac{0.5}{0.79} - C$
 $\frac{0.8}{0.93} - D$
large $\frac{0.93}{0.8} - B$

5) A  B  C  D  small $\frac{0.02}{0.34} - A$
 $\frac{0.35}{0.4} - D$
large $\frac{0.4}{0.35} - C$

6) A  B  C  D  small $\frac{0.1}{0.34} - D$
 $\frac{0.8}{0.91} - B$
large $\frac{0.91}{0.8} - A$

7) A  B  C  D  small $\frac{0.4}{0.58} - D$
 $\frac{0.6}{0.9} - B$
large $\frac{0.9}{0.6} - C$

8) A  B  C  D  small $\frac{0.2}{0.24} - D$
 $\frac{0.4}{0.92} - B$
large $\frac{0.92}{0.4} - C$

Answers

- Ex. A D C B
1. B B A C
2. C B D A
3. D C B A
4. C A D B
5. A B D C
6. D C B A
7. D A B C
8. D A B C