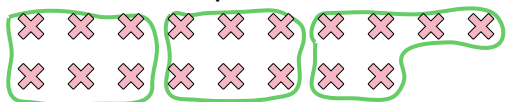


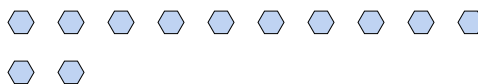
Use the shapes provided to answer the questions.

Answers

Ex) How many groups of 6 can you make with the 18 shapes below?



1) How many groups of 6 can you make with the 12 shapes below?



Ex. 3

1.

2. _____

3. _____

4. _____

5. _____

6.

7.

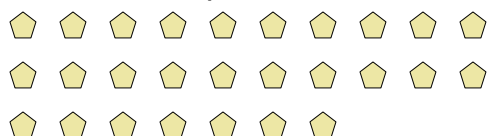
8.

9.

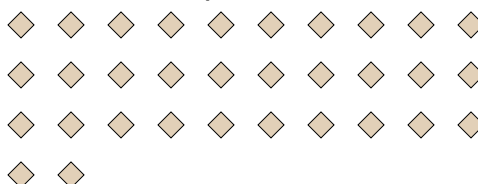
10.

11.

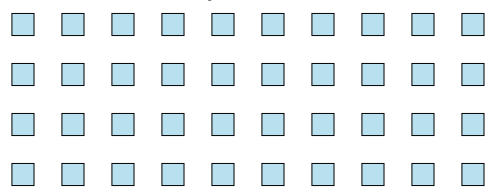
2) How many groups of 9 can you make with the 27 shapes below?




3) How many groups of 4 can you make with the 32 shapes below?



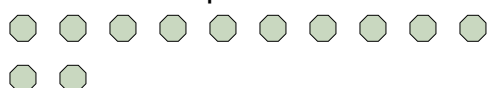
4) How many groups of 5 can you make with the 40 shapes below?



5) How many groups of 8 can you make with the 24 shapes below?




6) How many groups of 6 can you make with the 12 shapes below?



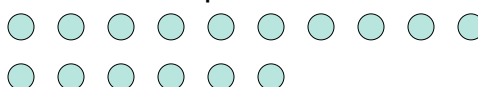
7) How many groups of 6 can you make with the 18 shapes below?



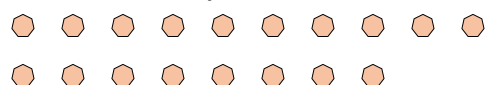
8) How many groups of 6 can you make with the 24 shapes below?



9) How many groups of 8 can you make with the 16 shapes below?



10) How many groups of 6 can you make with the 18 shapes below?



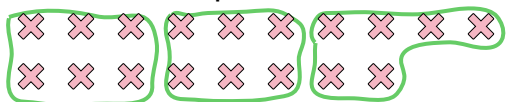
11) How many groups of 5 can you make with the 10 shapes below?



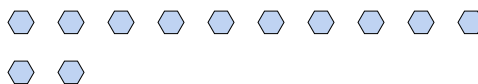


Use the shapes provided to answer the questions.

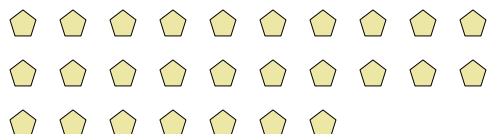
Ex) How many groups of 6 can you make with the 18 shapes below?



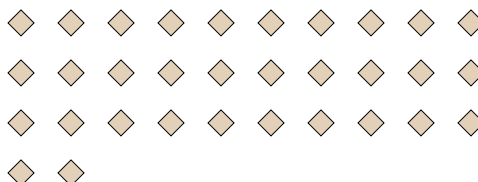
1) How many groups of 6 can you make with the 12 shapes below?



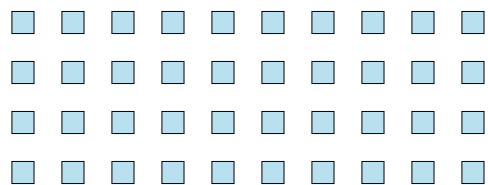
2) How many groups of 9 can you make with the 27 shapes below?




3) How many groups of 4 can you make with the 32 shapes below?



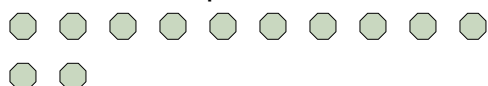
4) How many groups of 5 can you make with the 40 shapes below?



5) How many groups of 8 can you make with the 24 shapes below?




6) How many groups of 6 can you make with the 12 shapes below?



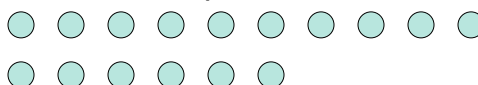
7) How many groups of 6 can you make with the 18 shapes below?



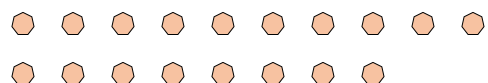
8) How many groups of 6 can you make with the 24 shapes below?



9) How many groups of 8 can you make with the 16 shapes below?



10) How many groups of 6 can you make with the 18 shapes below?



11) How many groups of 5 can you make with the 10 shapes below?

**Answers**Ex. 31. 22. 33. 84. 85. 36. 27. 38. 49. 210. 311. 2