




Write the shaded amount in word form.

Ex)



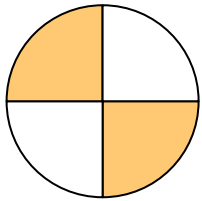
1)



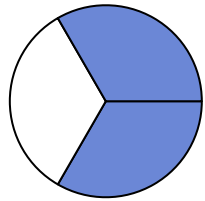
2)



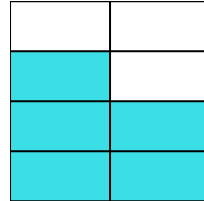
3)



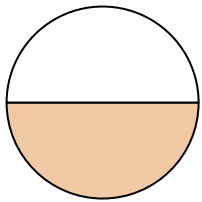
4)



5)



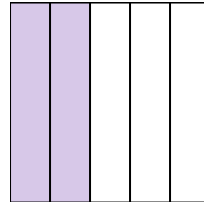
6)




7)




8)



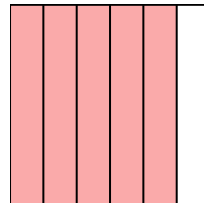
9)



10)



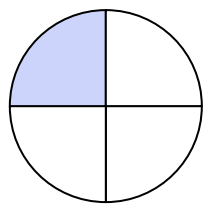
11)



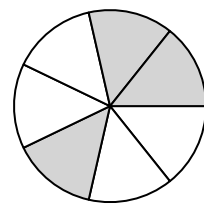
12)



13)



14)

**Answers**

Ex.

**one-half**

1.

2.

3.

4.

5.

6.

7.

8.

9.

10.

11.

12.


13.

14.




Write the shaded amount in word form.

Ex)



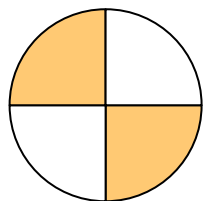
1)



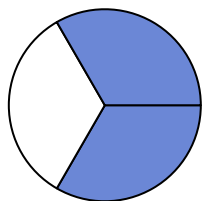
2)




3)



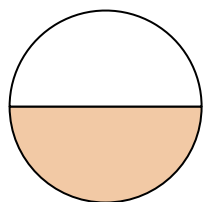
4)



5)



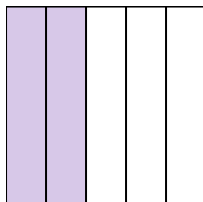
6)




7)




8)



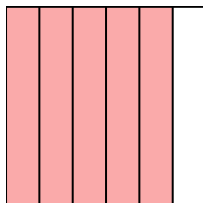
9)




10)



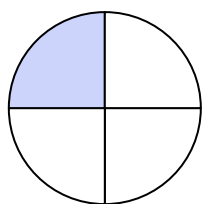
11)



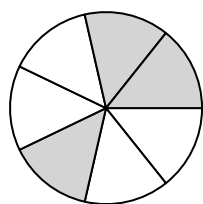
12)



13)



14)

**Answers**

Ex.

**one-half**

1.

**two-fifths**

2.

**five-tenths**

3.

**two-fourths**

4.

**two-thirds**

5.

**five-sevenths**

6.

**one-half**

7.

**four-eighths**

8.

**two-fifths**

9.

**two-thirds**

10.

**one-ninth**

11.

**five-sixths**

12.

**three-sixths**

13.

**one-fourth**

14.

**three-sevenths**