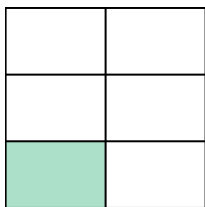


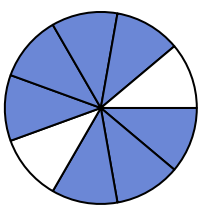


Write the shaded amount in word form.


Ex)




1)



2)



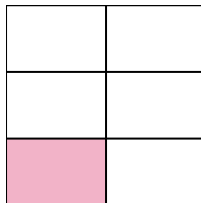
3)



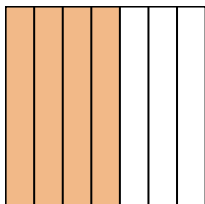
4)




5)



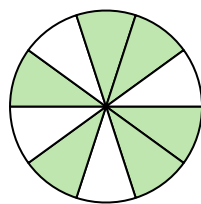
6)




7)



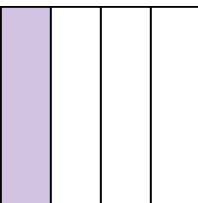
8)



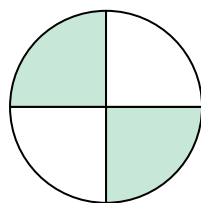
9)




10)




11)



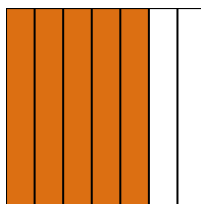
12)



13)



14)

**Answers**

Ex.

one-fifth

1.

2.

3.

4.

5.

6.

7.

8.

9.

10.

11.

12.

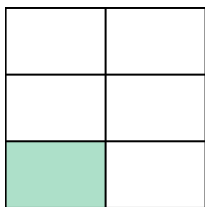
13.

14.

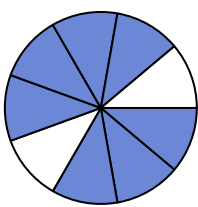


Write the shaded amount in word form.


Ex)




1)



2)



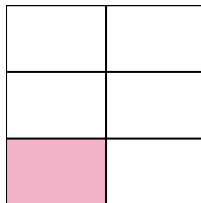
3)



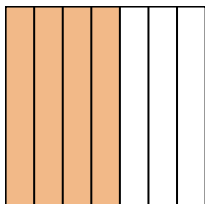
4)




5)



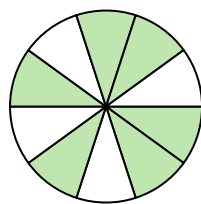
6)




7)



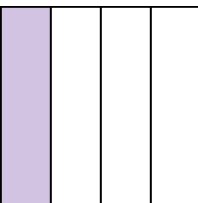
8)



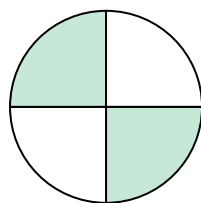
9)




10)




11)



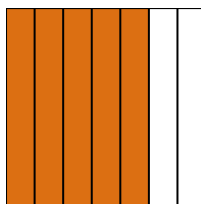
12)



13)



14)

**Answers**

Ex.

one-fifth

1.

seven-ninths

2.

two-sixths

3.

eight-ninths

4.

two-thirds

5.

one-fifth

6.

four-sevenths

7.

six-eighths

8.

six-tenths

9.

four-eighths

10.

one-fourth

11.

two-fourths

12.

one-half

13.

one-half

14.

five-sevenths