



# Identifying Fractions

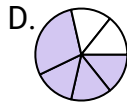
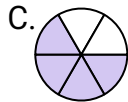
Name: \_\_\_\_\_

Determine which letter best represents each fraction.

**Answers**

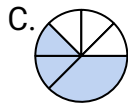
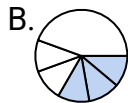
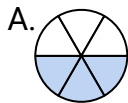
1)

Which choice best represents  $\frac{4}{6}$ ?



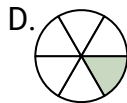
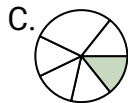
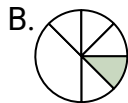
2)

Which choice best represents  $\frac{3}{6}$ ?



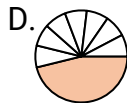
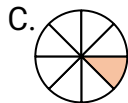
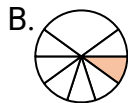
3)

Which choice best represents  $\frac{1}{6}$ ?



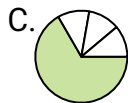
4)

Which choice best represents  $\frac{1}{8}$ ?



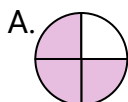
5)

Which choice best represents  $\frac{1}{4}$ ?



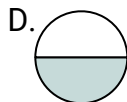
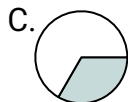
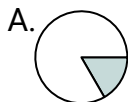
6)

Which choice best represents  $\frac{3}{4}$ ?



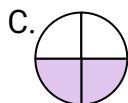
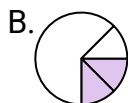
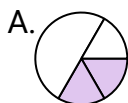
7)

Which choice best represents  $\frac{1}{2}$ ?



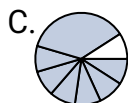
8)

Which choice best represents  $\frac{2}{4}$ ?



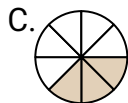
9)

Which choice best represents  $\frac{7}{8}$ ?



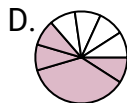
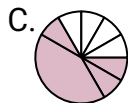
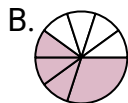
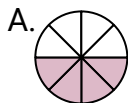
10)

Which choice best represents  $\frac{3}{8}$ ?



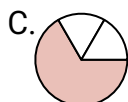
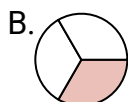
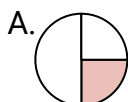
11)

Which choice best represents  $\frac{4}{8}$ ?



12)

Which choice best represents  $\frac{1}{3}$ ?



1. \_\_\_\_\_

2. \_\_\_\_\_

3. \_\_\_\_\_

4. \_\_\_\_\_

5. \_\_\_\_\_

6. \_\_\_\_\_

7. \_\_\_\_\_

8. \_\_\_\_\_

9. \_\_\_\_\_

10. \_\_\_\_\_

11. \_\_\_\_\_

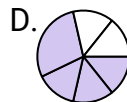
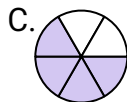
12. \_\_\_\_\_



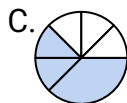
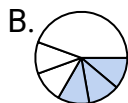
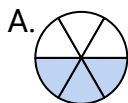
Determine which letter best represents each fraction.

**Answers**

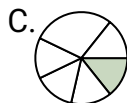
1)

Which choice best represents  $\frac{4}{6}$ ?1. **C**

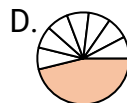
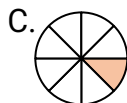
2)

Which choice best represents  $\frac{3}{6}$ ?2. **A**

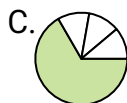
3)

Which choice best represents  $\frac{1}{6}$ ?3. **D**4. **C**

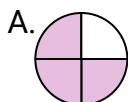
4)

Which choice best represents  $\frac{1}{8}$ ?5. **B**6. **A**

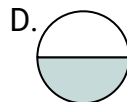
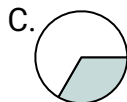
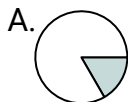
5)

Which choice best represents  $\frac{1}{4}$ ?7. **D**8. **C**

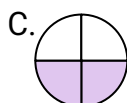
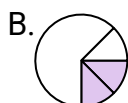
6)

Which choice best represents  $\frac{3}{4}$ ?9. **B**10. **C**

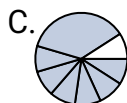
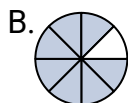
7)

Which choice best represents  $\frac{1}{2}$ ?11. **A**

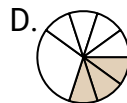
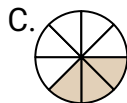
8)

Which choice best represents  $\frac{2}{4}$ ?12. **B**

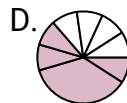
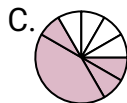
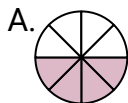
9)

Which choice best represents  $\frac{7}{8}$ ?

10)

Which choice best represents  $\frac{3}{8}$ ?

11)

Which choice best represents  $\frac{4}{8}$ ?

12)

Which choice best represents  $\frac{1}{3}$ ?