
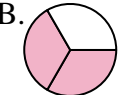

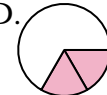












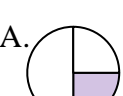

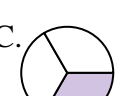















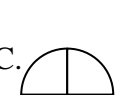











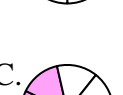



**Determine which letter best represents each fraction.****Answers**


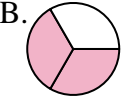

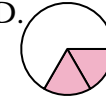


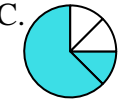
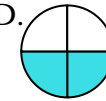
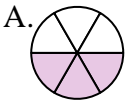
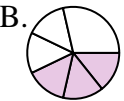




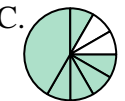

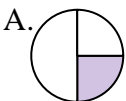
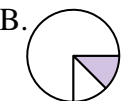
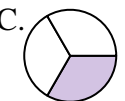











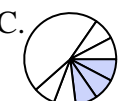



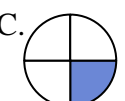


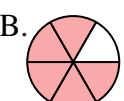










- 1) Which choice best represents  $\frac{2}{3}$ ? A.  B.  C.  D. 
- 2) Which choice best represents  $\frac{2}{4}$ ? A.  B.  C.  D. 
- 3) Which choice best represents  $\frac{3}{6}$ ? A.  B.  C.  D. 
- 4) Which choice best represents  $\frac{6}{8}$ ? A.  B.  C.  D. 
- 5) Which choice best represents  $\frac{1}{3}$ ? A.  B.  C.  D. 
- 6) Which choice best represents  $\frac{3}{4}$ ? A.  B.  C.  D. 
- 7) Which choice best represents  $\frac{2}{6}$ ? A.  B.  C.  D. 
- 8) Which choice best represents  $\frac{3}{8}$ ? A.  B.  C.  D. 
- 9) Which choice best represents  $\frac{1}{4}$ ? A.  B.  C.  D. 
- 10) Which choice best represents  $\frac{5}{6}$ ? A.  B.  C.  D. 
- 11) Which choice best represents  $\frac{2}{8}$ ? A.  B.  C.  D. 
- 12) Which choice best represents  $\frac{4}{6}$ ? A.  B.  C.  D. 

1. \_\_\_\_\_
2. \_\_\_\_\_
3. \_\_\_\_\_
4. \_\_\_\_\_
5. \_\_\_\_\_
6. \_\_\_\_\_
7. \_\_\_\_\_
8. \_\_\_\_\_
9. \_\_\_\_\_
10. \_\_\_\_\_
11. \_\_\_\_\_
12. \_\_\_\_\_



Determine which letter best represents each fraction.

**Answers**

- 1) Which choice best represents  $\frac{2}{3}$ ? A.  B.  C.  D. 
- 2) Which choice best represents  $\frac{2}{4}$ ? A.  B.  C.  D. 
- 3) Which choice best represents  $\frac{3}{6}$ ? A.  B.  C.  D. 
- 4) Which choice best represents  $\frac{6}{8}$ ? A.  B.  C.  D. 
- 5) Which choice best represents  $\frac{1}{3}$ ? A.  B.  C.  D. 
- 6) Which choice best represents  $\frac{3}{4}$ ? A.  B.  C.  D. 
- 7) Which choice best represents  $\frac{2}{6}$ ? A.  B.  C.  D. 
- 8) Which choice best represents  $\frac{3}{8}$ ? A.  B.  C.  D. 
- 9) Which choice best represents  $\frac{1}{4}$ ? A.  B.  C.  D. 
- 10) Which choice best represents  $\frac{5}{6}$ ? A.  B.  C.  D. 
- 11) Which choice best represents  $\frac{2}{8}$ ? A.  B.  C.  D. 
- 12) Which choice best represents  $\frac{4}{6}$ ? A.  B.  C.  D. 

1. **B**
2. **D**
3. **A**
4. **A**
5. **C**
6. **B**
7. **D**
8. **B**
9. **C**
10. **B**
11. **B**
12. **D**