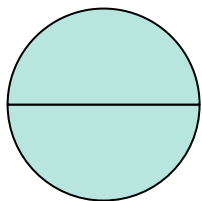


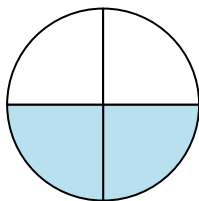
**Determine which letter best describes the shaded portion.****Answers**

1)



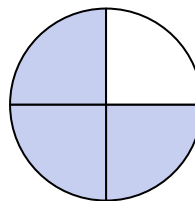
- A. four-fourths
B. two-halves
C. one-half

2)




- A. four-quarters
B. one-half
C. two-fourths

3)




- A. four-fourths
B. two-fourths
C. three-fourths

4)



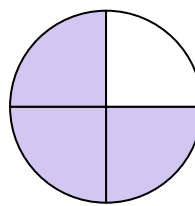
- A. three-fourths
B. one-quarter
C. one-half

5)



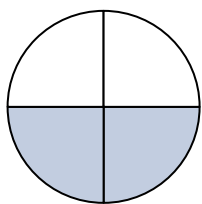
- A. one-fourth
B. two-quarters
C. one-half

6)



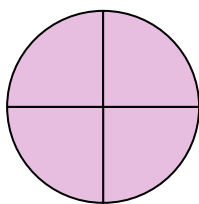
- A. two-quarters
B. three-fourths
C. one-half

7)



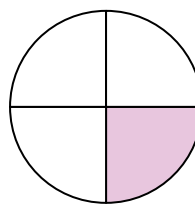
- A. two-fourths
B. four-fourths
C. two-halves

8)



- A. four-quarters
B. two-halves
C. two-quarters

9)



- A. two-halves
B. one-half
C. one-quarter

1. _____

2. _____

3. _____

4. _____

5. _____

6. _____

7. _____

8. _____

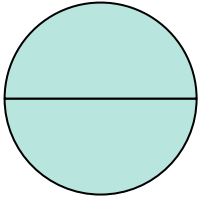
9. _____



Determine which letter best describes the shaded portion.

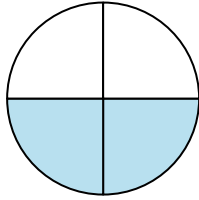
Answers

1)



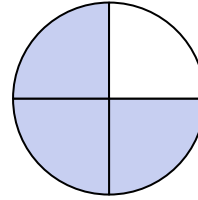
- A. four-fourths
B. two-halves
C. one-half

2)




- A. four-quarters
B. one-half
C. two-fourths

3)



- A. four-fourths
B. two-fourths
C. three-fourths

4)



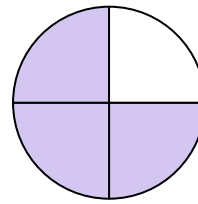
- A. three-fourths
B. one-quarter
C. one-half

5)



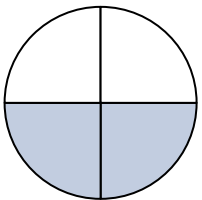
- A. one-fourth
B. two-quarters
C. one-half

6)



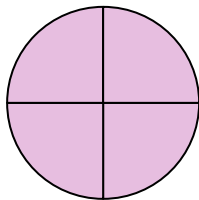
- A. two-quarters
B. three-fourths
C. one-half

7)



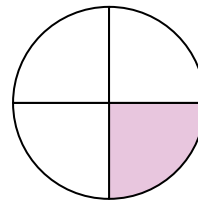
- A. two-fourths
B. four-fourths
C. two-halves

8)



- A. four-quarters
B. two-halves
C. two-quarters

9)



- A. two-halves
B. one-half
C. one-quarter

1. **B**
2. **C**
3. **C**
4. **C**
5. **C**
6. **B**
7. **A**
8. **A**
9. **C**