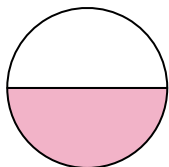



**Determine which letter best describes the shaded portion.****Answers**

1)



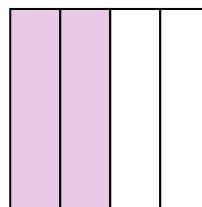
- A. one-half
B. two-halves
C. one-fourth

2)



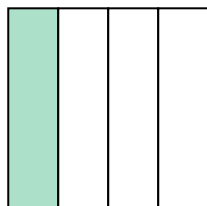
- A. three-fourths
B. one-quarter
C. two-halves

3)



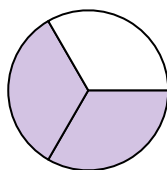
- A. two-quarters
B. one-half
C. three-fourths

4)



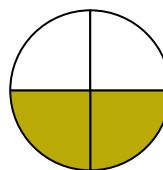
- A. three-fourths
B. one-fourth
C. two-halves

5)



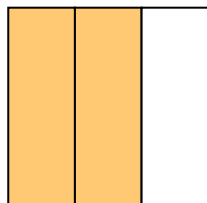
- A. three-fourths
B. two-thirds
C. two-quarters

6)



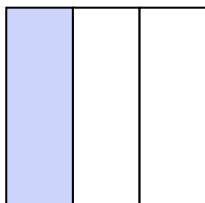
- A. three-fourths
B. two-fourths
C. four-fourths

7)



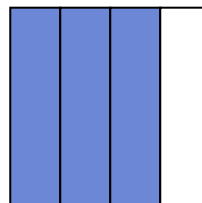
- A. one-quarter
B. four-quarters
C. two-thirds

8)




- A. three-fourths
B. one-third
C. two-halves

9)



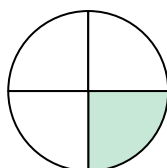
- A. four-fourths
B. three-fourths
C. two-quarters

10)




- A. two-halves
B. one-quarter
C. one-half

11)



- A. four-fourths
B. one-half
C. one-quarter

12)



- A. three-thirds
B. two-halves
C. one-quarter

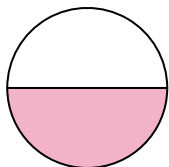
1. _____
2. _____
3. _____
4. _____
5. _____
6. _____
7. _____
8. _____
9. _____
10. _____
11. _____
12. _____



Determine which letter best describes the shaded portion.


Answers

1)



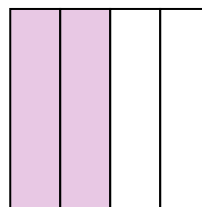
- A. one-half
B. two-halves
C. one-fourth

2)




- A. three-fourths
B. one-quarter
C. two-halves

3)



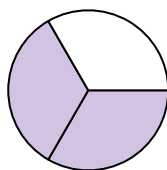
- A. two-quarters
B. one-half
C. three-fourths

4)



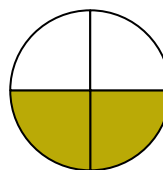
- A. three-fourths
B. one-fourth
C. two-halves

5)



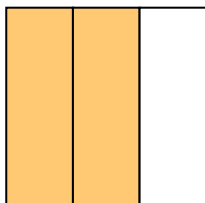
- A. three-fourths
B. two-thirds
C. two-quarters

6)



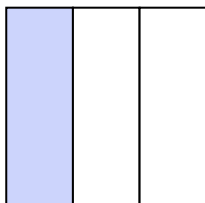
- A. three-fourths
B. two-fourths
C. four-fourths

7)



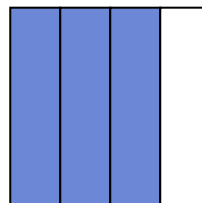
- A. one-quarter
B. four-quarters
C. two-thirds

8)




- A. three-fourths
B. one-third
C. two-halves

9)



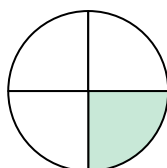
- A. four-fourths
B. three-fourths
C. two-quarters

10)




- A. two-halves
B. one-quarter
C. one-half

11)



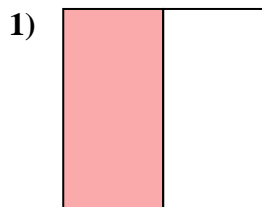
- A. four-fourths
B. one-half
C. one-quarter

12)

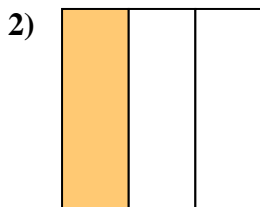


- A. three-thirds
B. two-halves
C. one-quarter

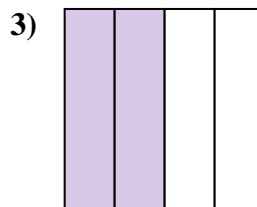
1. **A**
2. **C**
3. **A**
4. **B**
5. **B**
6. **B**
7. **C**
8. **B**
9. **B**
10. **C**
11. **C**
12. **A**

**Determine which letter best describes the shaded portion.****Answers**

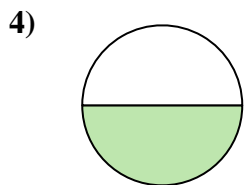
- A. one-half
B. one-quarter
C. two-quarters



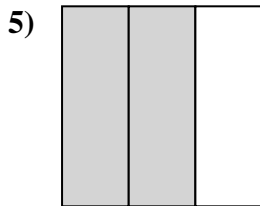
- A. one-fourth
B. one-third
C. two-halves



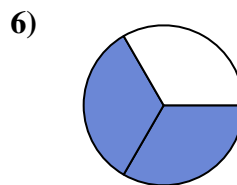
- A. two-halves
B. two-quarters
C. four-fourths



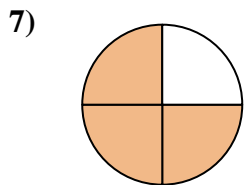
- A. one-half
B. four-quarters
C. three-fourths



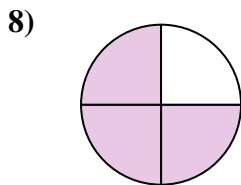
- A. two-thirds
B. two-quarters
C. four-quarters



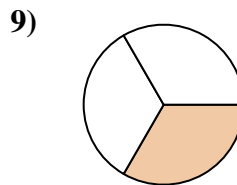
- A. two-thirds
B. two-halves
C. one-quarter



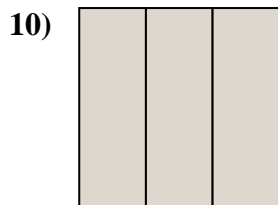
- A. four-fourths
B. one-quarter
C. three-fourths



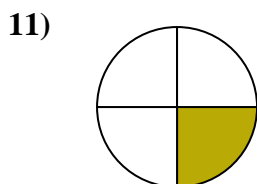
- A. three-quarters
B. two-halves
C. four-quarters



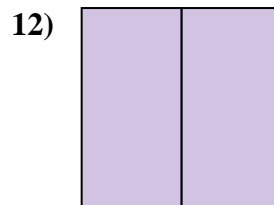
- A. one-third
B. two-fourths
C. four-fourths



- A. one-quarter
B. three-thirds
C. two-quarters



- A. one-fourth
B. four-fourths
C. two-halves

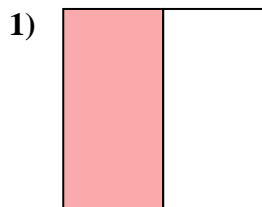


- A. three-quarters
B. two-fourths
C. two-halves

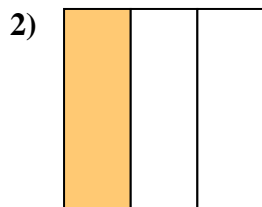
1. _____
2. _____
3. _____
4. _____
5. _____
6. _____
7. _____
8. _____
9. _____
10. _____
11. _____
12. _____



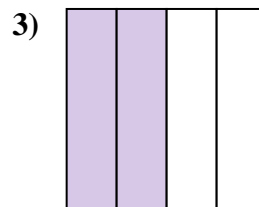
Determine which letter best describes the shaded portion.



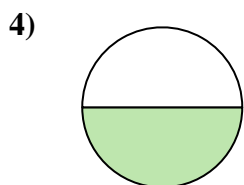
- A. one-half
B. one-quarter
C. two-quarters



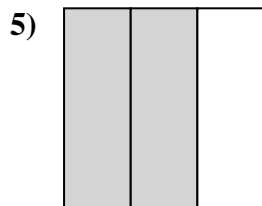
- A. one-fourth
B. one-third
C. two-halves



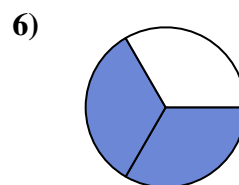
- A. two-halves
B. two-quarters
C. four-fourths



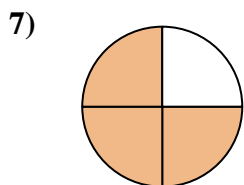
- A. one-half
B. four-quarters
C. three-fourths



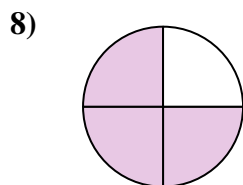
- A. two-thirds
B. two-quarters
C. four-quarters



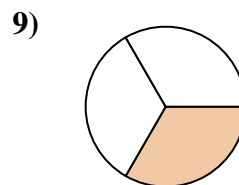
- A. two-thirds
B. two-halves
C. one-quarter



- A. four-fourths
B. one-quarter
C. three-fourths



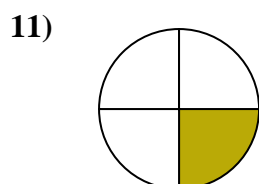
- A. three-quarters
B. two-halves
C. four-quarters



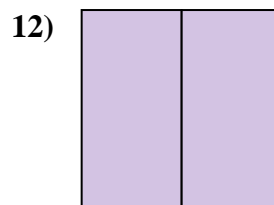
- A. one-third
B. two-fourths
C. four-fourths



- A. one-quarter
B. three-thirds
C. two-quarters



- A. one-fourth
B. four-fourths
C. two-halves



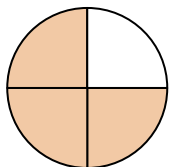
- A. three-quarters
B. two-fourths
C. two-halves

Answers

1. **A**
2. **B**
3. **B**
4. **A**
5. **A**
6. **A**
7. **C**
8. **A**
9. **A**
10. **B**
11. **A**
12. **C**

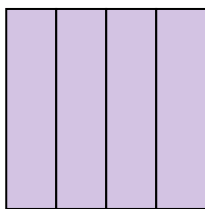
**Determine which letter best describes the shaded portion.****Answers**

1)



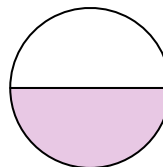
- A. four-fourths
B. two-halves
C. three-fourths

2)



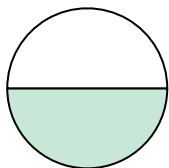
- A. one-half
B. four-fourths
C. one-quarter

3)



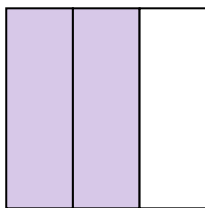
- A. one-half
B. two-halves
C. three-quarters

4)



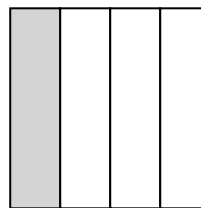
- A. one-half
B. two-fourths
C. two-halves

5)



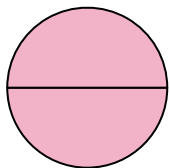
- A. two-quarters
B. one-fourth
C. two-thirds

6)



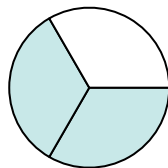
- A. four-quarters
B. two-halves
C. one-quarter

7)



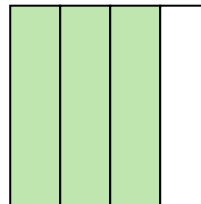
- A. one-fourth
B. two-halves
C. one-half

8)



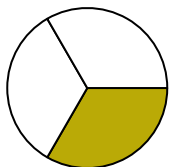
- A. one-half
B. two-halves
C. two-thirds

9)



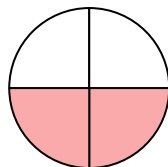
- A. four-fourths
B. two-halves
C. three-fourths

10)



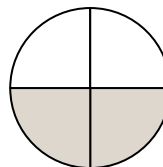
- A. one-fourth
B. one-half
C. one-third

11)



- A. four-fourths
B. one-quarter
C. two-quarters

12)



- A. two-fourths
B. two-halves
C. one-fourth

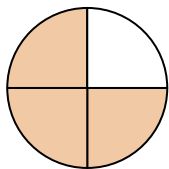
1. _____
2. _____
3. _____
4. _____
5. _____
6. _____
7. _____
8. _____
9. _____
10. _____
11. _____
12. _____



Determine which letter best describes the shaded portion.

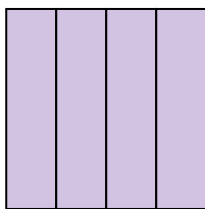
Answers

1)



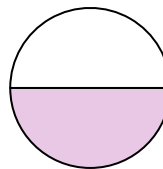
- A. four-fourths
B. two-halves
C. three-fourths

2)



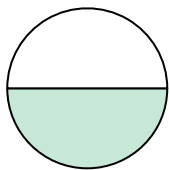
- A. one-half
B. four-fourths
C. one-quarter

3)



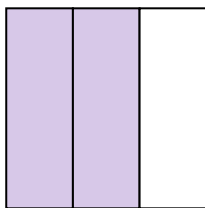
- A. one-half
B. two-halves
C. three-quarters

4)



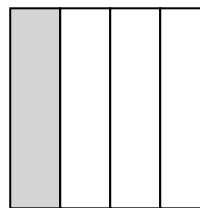
- A. one-half
B. two-fourths
C. two-halves

5)



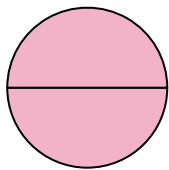
- A. two-quarters
B. one-fourth
C. two-thirds

6)



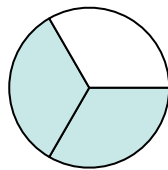
- A. four-quarters
B. two-halves
C. one-quarter

7)



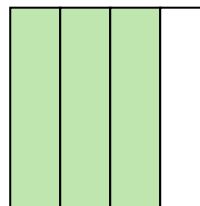
- A. one-fourth
B. two-halves
C. one-half

8)



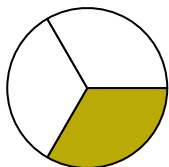
- A. one-half
B. two-halves
C. two-thirds

9)



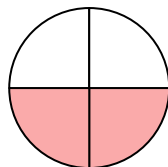
- A. four-fourths
B. two-halves
C. three-fourths

10)



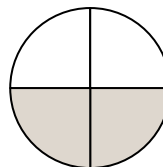
- A. one-fourth
B. one-half
C. one-third

11)



- A. four-fourths
B. one-quarter
C. two-quarters

12)

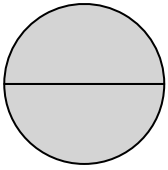


- A. two-fourths
B. two-halves
C. one-fourth

1. **C**
2. **B**
3. **A**
4. **A**
5. **C**
6. **C**
7. **B**
8. **C**
9. **C**
10. **C**
11. **C**
12. **A**

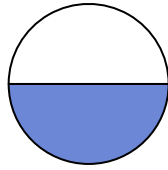
**Determine which letter best describes the shaded portion.****Answers**

1)



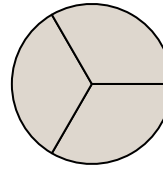
- A. two-halves
B. one-fourth
C. four-fourths

2)




- A. two-halves
B. one-half
C. two-fourths

3)



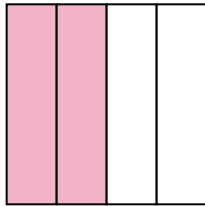
- A. two-fourths
B. three-thirds
C. one-half

4)



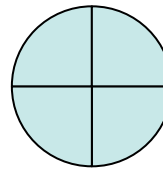
- A. three-thirds
B. four-quarters
C. one-half

5)



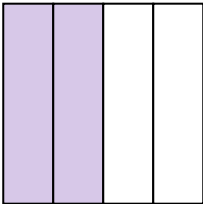
- A. two-fourths
B. one-quarter
C. four-quarters

6)



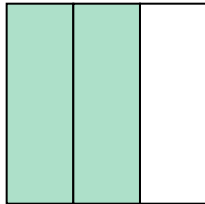
- A. one-fourth
B. two-halves
C. four-quarters

7)



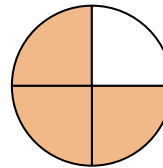
- A. four-fourths
B. two-halves
C. two-quarters

8)



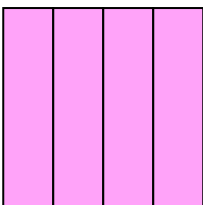
- A. three-quarters
B. two-fourths
C. two-thirds

9)




- A. three-fourths
B. two-halves
C. one-quarter

10)



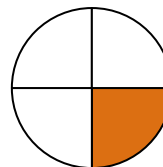
- A. four-fourths
B. two-fourths
C. one-fourth

11)



- A. two-halves
B. one-half
C. three-fourths

12)



- A. two-halves
B. one-half
C. one-fourth

1. _____

2. _____

3. _____

4. _____

5. _____

6. _____

7. _____

8. _____

9. _____

10. _____

11. _____

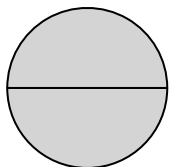
12. _____



Determine which letter best describes the shaded portion.

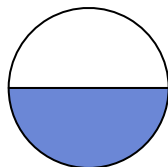
Answers

1)



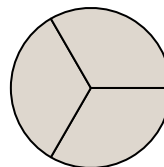
- A. two-halves
B. one-fourth
C. four-fourths

2)




- A. two-halves
B. one-half
C. two-fourths

3)



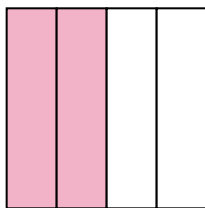
- A. two-fourths
B. three-thirds
C. one-half

4)



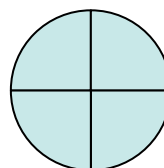
- A. three-thirds
B. four-quarters
C. one-half

5)



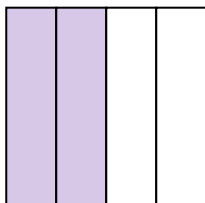
- A. two-fourths
B. one-quarter
C. four-quarters

6)




- A. one-fourth
B. two-halves
C. four-quarters

7)



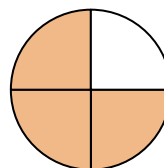
- A. four-fourths
B. two-halves
C. two-quarters

8)




- A. three-quarters
B. two-fourths
C. two-thirds

9)




- A. three-fourths
B. two-halves
C. one-quarter

10)



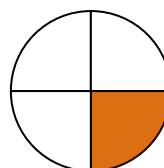
- A. four-fourths
B. two-fourths
C. one-fourth

11)



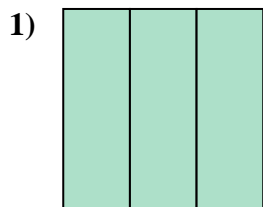
- A. two-halves
B. one-half
C. three-fourths

12)

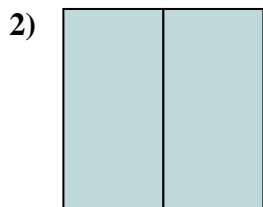


- A. two-halves
B. one-half
C. one-fourth

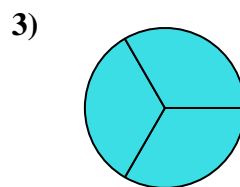
1. **A**
2. **B**
3. **B**
4. **A**
5. **A**
6. **C**
7. **C**
8. **C**
9. **A**
10. **A**
11. **B**
12. **C**

**Determine which letter best describes the shaded portion.****Answers**

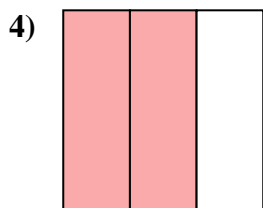
- A. three-quarters
B. three-thirds
C. two-halves



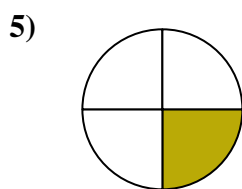
- A. three-fourths
B. two-halves
C. two-fourths



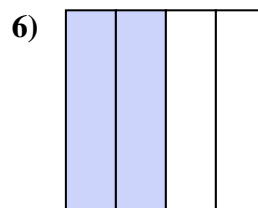
- A. three-fourths
B. two-quarters
C. three-thirds



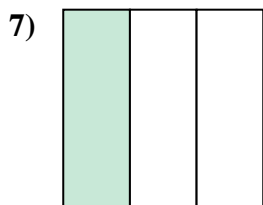
- A. two-thirds
B. four-quarters
C. one-fourth



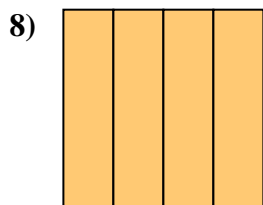
- A. two-fourths
B. one-quarter
C. two-halves



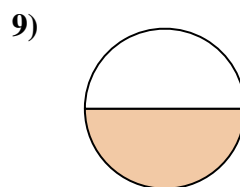
- A. one-quarter
B. one-half
C. two-fourths



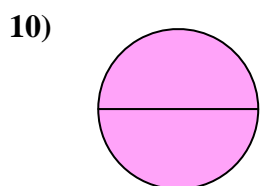
- A. four-quarters
B. one-third
C. one-quarter



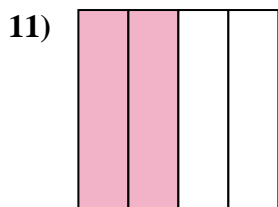
- A. four-quarters
B. one-half
C. two-halves



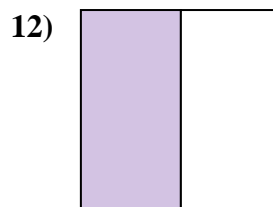
- A. one-fourth
B. two-halves
C. one-half



- A. four-quarters
B. two-halves
C. three-fourths



- A. two-quarters
B. one-quarter
C. three-fourths

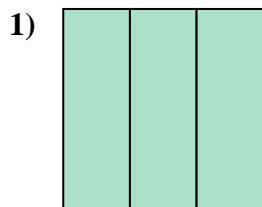


- A. four-fourths
B. one-half
C. three-quarters

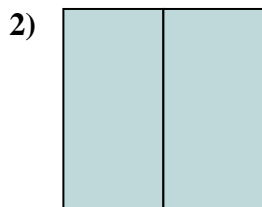
1. _____
2. _____
3. _____
4. _____
5. _____
6. _____
7. _____
8. _____
9. _____
10. _____
11. _____
12. _____



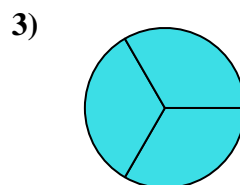
Determine which letter best describes the shaded portion.



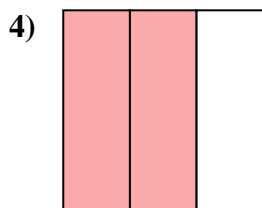
- A. three-quarters
B. three-thirds
C. two-halves



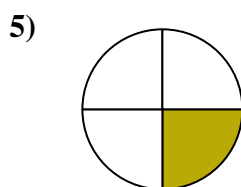
- A. three-fourths
B. two-halves
C. two-fourths



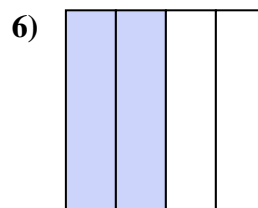
- A. three-fourths
B. two-quarters
C. three-thirds



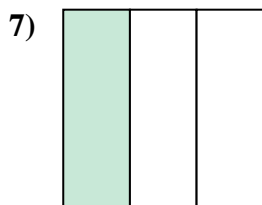
- A. two-thirds
B. four-quarters
C. one-fourth



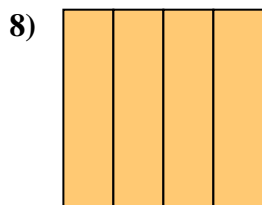
- A. two-fourths
B. one-quarter
C. two-halves



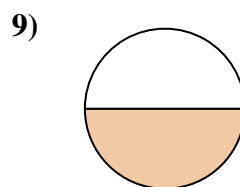
- A. one-quarter
B. one-half
C. two-fourths



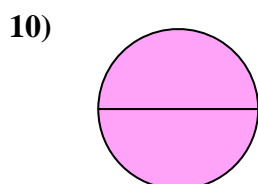
- A. four-quarters
B. one-third
C. one-quarter



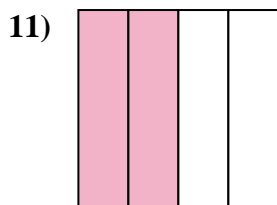
- A. four-quarters
B. one-half
C. two-halves



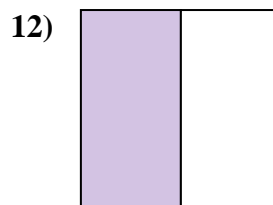
- A. one-fourth
B. two-halves
C. one-half



- A. four-quarters
B. two-halves
C. three-fourths



- A. two-quarters
B. one-quarter
C. three-fourths



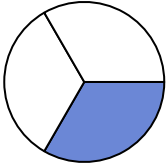
- A. four-fourths
B. one-half
C. three-quarters

Answers

1. **B**
2. **B**
3. **C**
4. **A**
5. **B**
6. **C**
7. **B**
8. **A**
9. **C**
10. **B**
11. **A**
12. **B**

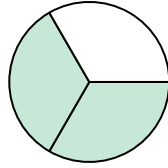
**Determine which letter best describes the shaded portion.****Answers**

1)



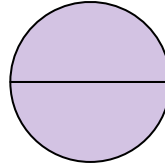
- A. four-quarters
B. one-quarter
C. one-third

2)



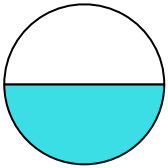
- A. two-thirds
B. one-half
C. one-quarter

3)



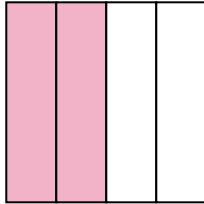
- A. one-fourth
B. two-quarters
C. two-halves

4)



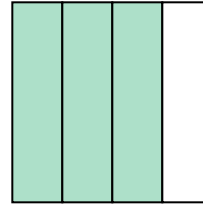
- A. one-half
B. four-quarters
C. three-fourths

5)




- A. four-quarters
B. two-halves
C. two-fourths

6)




- A. one-fourth
B. four-quarters
C. three-quarters

7)



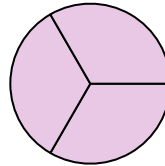
- A. two-fourths
B. two-halves
C. one-half

8)



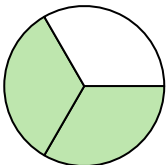
- A. two-fourths
B. one-third
C. three-fourths

9)



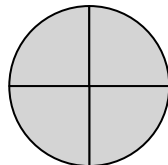
- A. three-thirds
B. one-half
C. three-quarters

10)



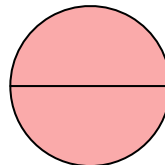
- A. four-fourths
B. two-thirds
C. three-fourths

11)



- A. one-fourth
B. four-quarters
C. one-half

12)



- A. two-halves
B. two-fourths
C. four-fourths

1. _____

2. _____

3. _____

4. _____

5. _____

6. _____

7. _____

8. _____

9. _____

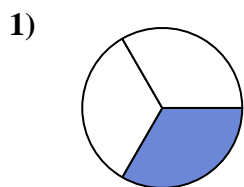
10. _____

11. _____

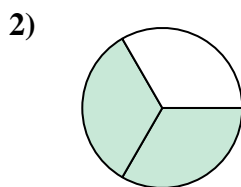
12. _____



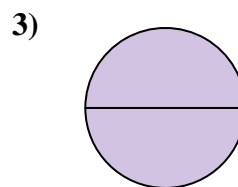
Determine which letter best describes the shaded portion.

Answers

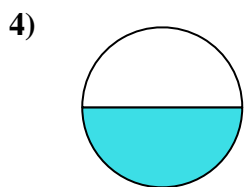
- A. four-quarters
B. one-quarter
C. one-third



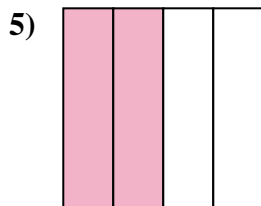
- A. two-thirds
B. one-half
C. one-quarter



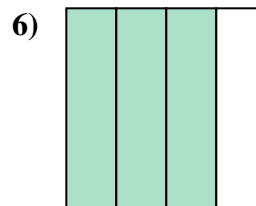
- A. one-fourth
B. two-quarters
C. two-halves




- A. one-half
B. four-quarters
C. three-fourths



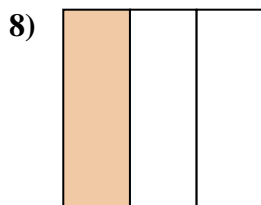
- A. four-quarters
B. two-halves
C. two-fourths



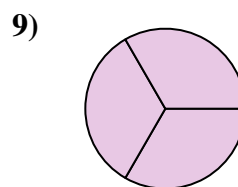
- A. one-fourth
B. four-quarters
C. three-quarters



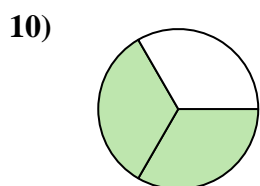
- A. two-fourths
B. two-halves
C. one-half



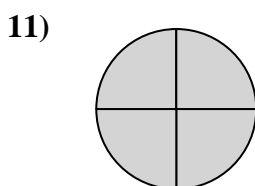
- A. two-fourths
B. one-third
C. three-fourths



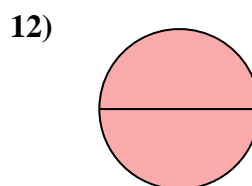
- A. three-thirds
B. one-half
C. three-quarters



- A. four-fourths
B. two-thirds
C. three-fourths

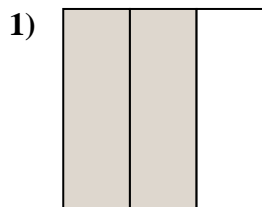


- A. one-fourth
B. four-quarters
C. one-half

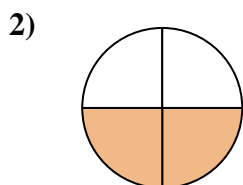


- A. two-halves
B. two-fourths
C. four-fourths

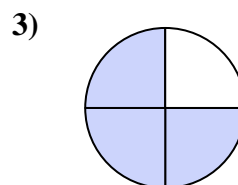
1. **C**
2. **A**
3. **C**
4. **A**
5. **C**
6. **C**
7. **C**
8. **B**
9. **A**
10. **B**
11. **B**
12. **A**

**Determine which letter best describes the shaded portion.****Answers**

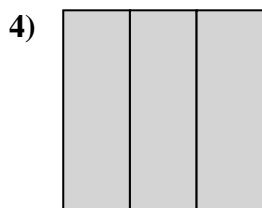
- A. two-thirds
B. two-fourths
C. two-halves



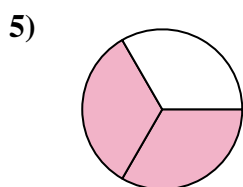
- A. four-fourths
B. two-fourths
C. one-half



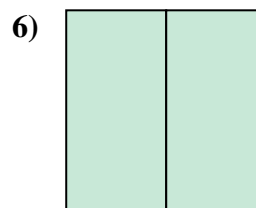
- A. three-fourths
B. four-quarters
C. two-halves



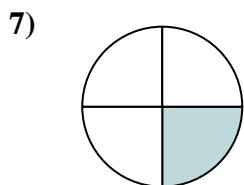
- A. three-thirds
B. one-fourth
C. two-halves



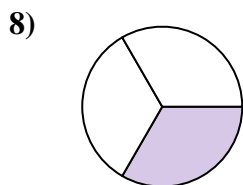
- A. two-halves
B. two-fourths
C. two-thirds



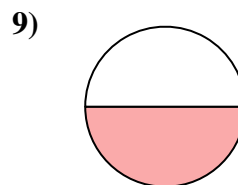
- A. one-fourth
B. two-fourths
C. two-halves



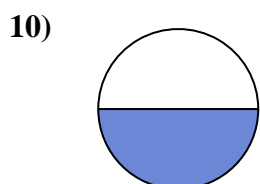
- A. two-halves
B. three-fourths
C. one-fourth



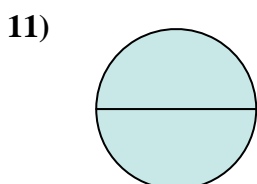
- A. two-halves
B. two-fourths
C. one-third



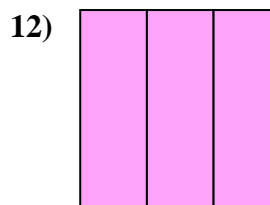
- A. two-halves
B. four-fourths
C. one-half



- A. two-fourths
B. one-fourth
C. one-half



- A. two-halves
B. three-fourths
C. four-quarters

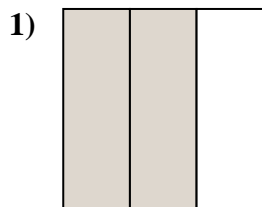


- A. three-thirds
B. one-fourth
C. three-quarters

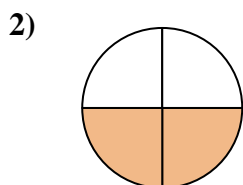
1. _____
2. _____
3. _____
4. _____
5. _____
6. _____
7. _____
8. _____
9. _____
10. _____
11. _____
12. _____



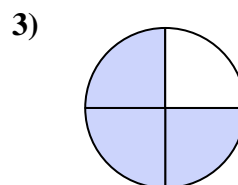
Determine which letter best describes the shaded portion.

Answers

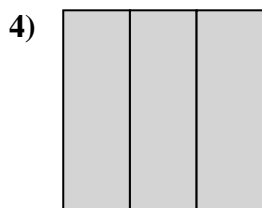
- A. two-thirds
B. two-fourths
C. two-halves



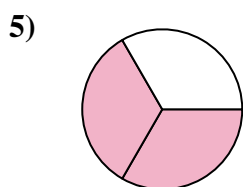
- A. four-fourths
B. two-fourths
C. one-half



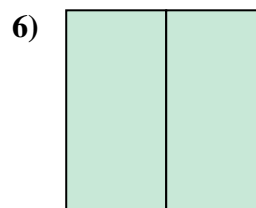
- A. three-fourths
B. four-quarters
C. two-halves



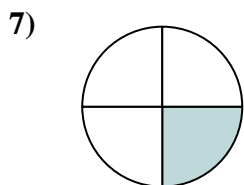
- A. three-thirds
B. one-fourth
C. two-halves



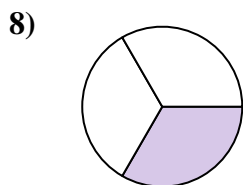
- A. two-halves
B. two-fourths
C. two-thirds



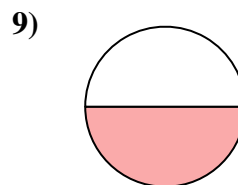
- A. one-fourth
B. two-fourths
C. two-halves



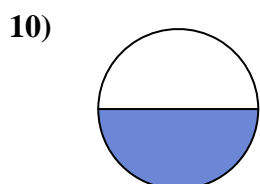
- A. two-halves
B. three-fourths
C. one-fourth



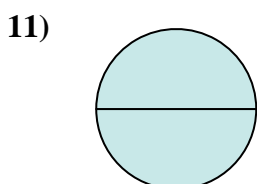
- A. two-halves
B. two-fourths
C. one-third



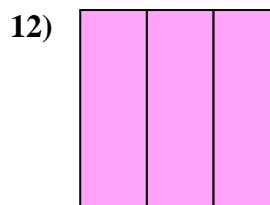
- A. two-halves
B. four-fourths
C. one-half



- A. two-fourths
B. one-fourth
C. one-half

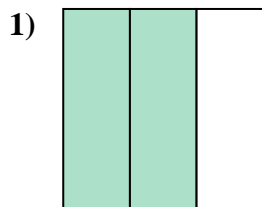


- A. two-halves
B. three-fourths
C. four-quarters

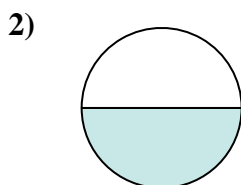


- A. three-thirds
B. one-fourth
C. three-quarters

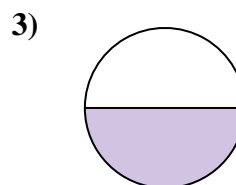
1. **A**
2. **B**
3. **A**
4. **A**
5. **C**
6. **C**
7. **C**
8. **C**
9. **C**
10. **C**
11. **A**
12. **A**

**Determine which letter best describes the shaded portion.****Answers**

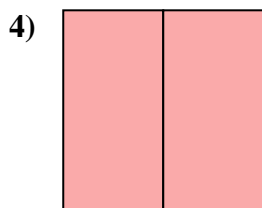
- A. two-halves
B. two-thirds
C. one-quarter



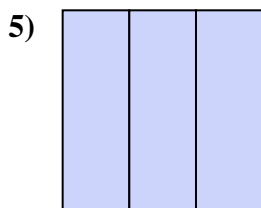
- A. one-fourth
B. two-quarters
C. one-half



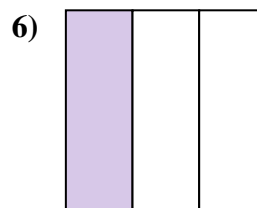
- A. two-fourths
B. one-half
C. two-halves



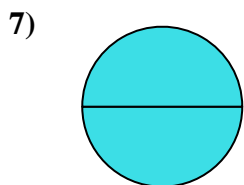
- A. two-halves
B. two-quarters
C. one-half



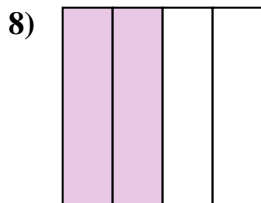
- A. three-fourths
B. three-thirds
C. one-fourth



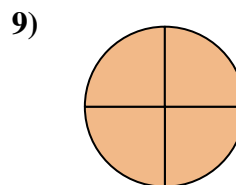
- A. two-halves
B. one-third
C. one-quarter



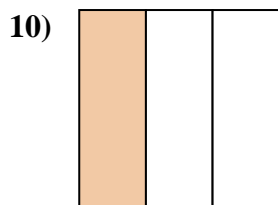
- A. four-fourths
B. one-half
C. two-halves



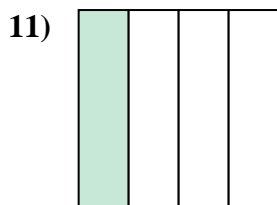
- A. three-quarters
B. two-quarters
C. two-halves



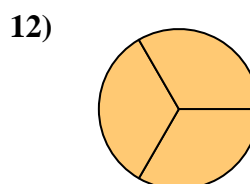
- A. one-half
B. four-fourths
C. two-fourths



- A. one-third
B. one-half
C. two-halves



- A. three-quarters
B. two-halves
C. one-quarter

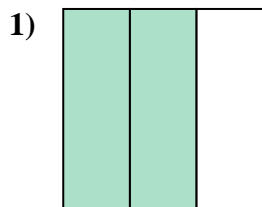


- A. three-thirds
B. two-halves
C. one-half

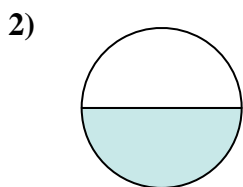
1. _____
2. _____
3. _____
4. _____
5. _____
6. _____
7. _____
8. _____
9. _____
10. _____
11. _____
12. _____



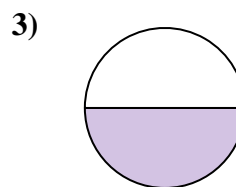
Determine which letter best describes the shaded portion.



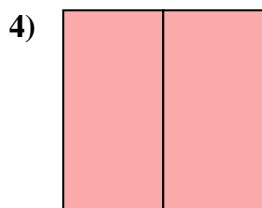
- A. two-halves
B. two-thirds
C. one-quarter



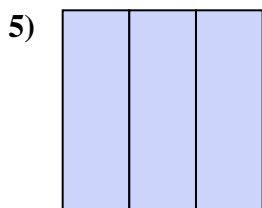
- A. one-fourth
B. two-quarters
C. one-half



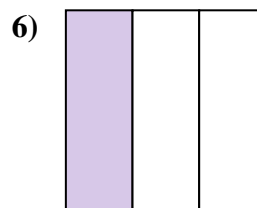
- A. two-fourths
B. one-half
C. two-halves



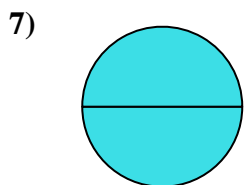
- A. two-halves
B. two-quarters
C. one-half



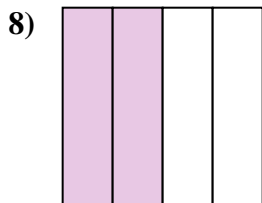
- A. three-fourths
B. three-thirds
C. one-fourth



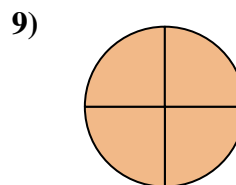
- A. two-halves
B. one-third
C. one-quarter



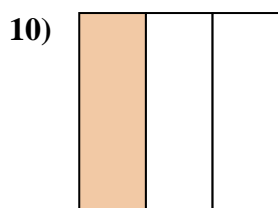
- A. four-fourths
B. one-half
C. two-halves



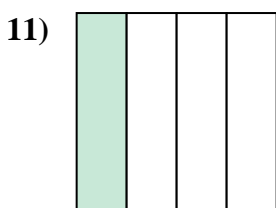
- A. three-quarters
B. two-quarters
C. two-halves



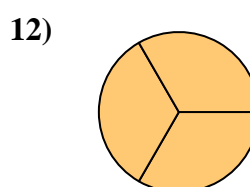
- A. one-half
B. four-fourths
C. two-fourths



- A. one-third
B. one-half
C. two-halves



- A. three-quarters
B. two-halves
C. one-quarter



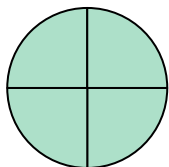
- A. three-thirds
B. two-halves
C. one-half

Answers

1. **B**
2. **C**
3. **B**
4. **A**
5. **B**
6. **B**
7. **C**
8. **B**
9. **B**
10. **A**
11. **C**
12. **A**


**Determine which letter best describes the shaded portion.****Answers**

1)



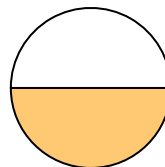
- A. one-fourth
B. three-fourths
C. four-fourths

2)




- A. three-quarters
B. one-quarter
C. one-half

3)




- A. two-quarters
B. three-quarters
C. one-half

4)



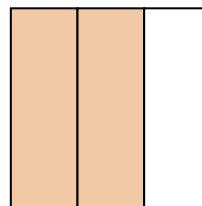
- A. two-halves
B. one-half
C. three-thirds

5)



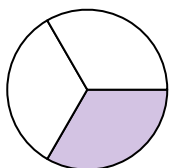
- A. two-halves
B. one-quarter
C. two-fourths

6)



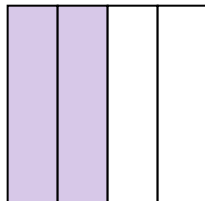
- A. two-thirds
B. two-halves
C. one-fourth

7)



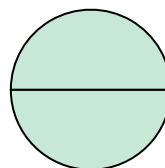
- A. four-fourths
B. two-halves
C. one-third

8)



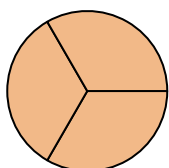
- A. one-half
B. two-quarters
C. three-quarters

9)



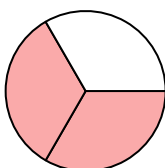
- A. two-quarters
B. four-fourths
C. two-halves

10)



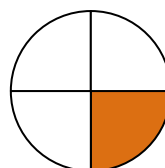
- A. three-thirds
B. one-fourth
C. two-halves

11)



- A. one-quarter
B. two-thirds
C. four-quarters

12)



- A. one-fourth
B. three-quarters
C. two-halves

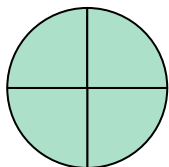
1. _____
2. _____
3. _____
4. _____
5. _____
6. _____
7. _____
8. _____
9. _____
10. _____
11. _____
12. _____



Determine which letter best describes the shaded portion.


Answers

1)



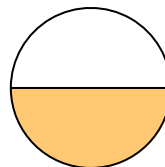
- A. one-fourth
B. three-fourths
C. four-fourths

2)




- A. three-quarters
B. one-quarter
C. one-half

3)




- A. two-quarters
B. three-quarters
C. one-half

4)



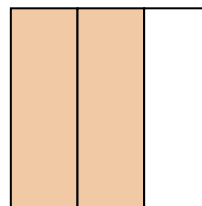
- A. two-halves
B. one-half
C. three-thirds

5)



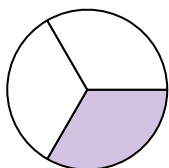
- A. two-halves
B. one-quarter
C. two-fourths

6)



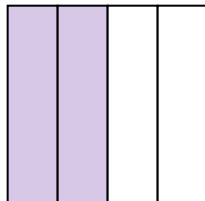
- A. two-thirds
B. two-halves
C. one-fourth

7)



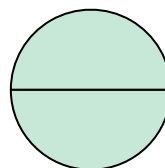
- A. four-fourths
B. two-halves
C. one-third

8)



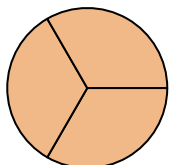
- A. one-half
B. two-quarters
C. three-quarters

9)



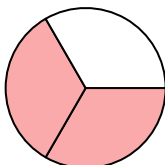
- A. two-quarters
B. four-fourths
C. two-halves

10)



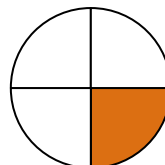
- A. three-thirds
B. one-fourth
C. two-halves

11)



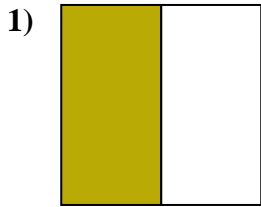
- A. one-quarter
B. two-thirds
C. four-quarters

12)

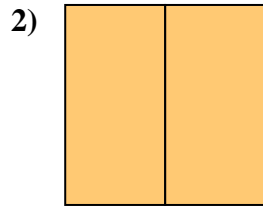


- A. one-fourth
B. three-quarters
C. two-halves

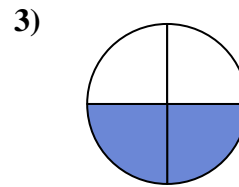
1. **C**
2. **C**
3. **C**
4. **C**
5. **A**
6. **A**
7. **C**
8. **B**
9. **C**
10. **A**
11. **B**
12. **A**

**Determine which letter best describes the shaded portion.****Answers**

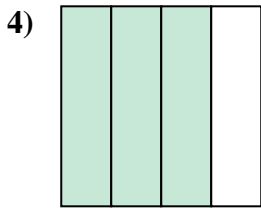
- A. two-fourths
B. one-half
C. two-halves



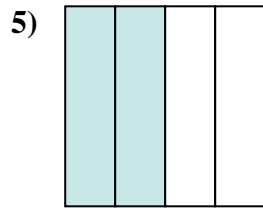
- A. two-halves
B. four-fourths
C. three-quarters



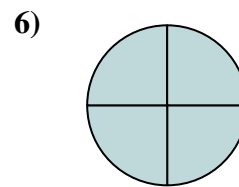
- A. one-quarter
B. three-fourths
C. two-quarters



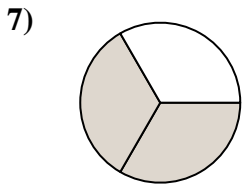
- A. one-fourth
B. three-quarters
C. two-fourths



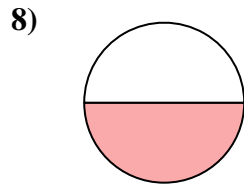
- A. two-quarters
B. three-fourths
C. two-halves



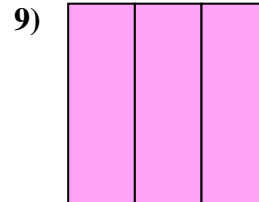
- A. four-quarters
B. two-halves
C. two-fourths



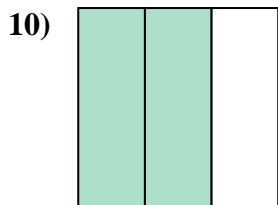
- A. one-quarter
B. two-halves
C. two-thirds



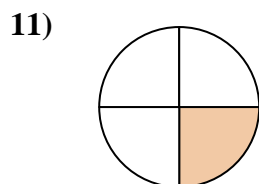
- A. four-fourths
B. two-halves
C. one-half



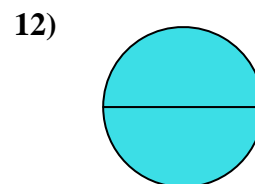
- A. one-half
B. three-thirds
C. four-quarters



- A. two-halves
B. two-thirds
C. three-fourths



- A. four-quarters
B. three-fourths
C. one-quarter



- A. two-halves
B. one-quarter
C. one-half

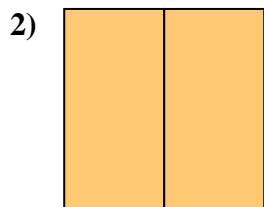
1. _____
2. _____
3. _____
4. _____
5. _____
6. _____
7. _____
8. _____
9. _____
10. _____
11. _____
12. _____



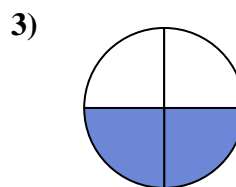
Determine which letter best describes the shaded portion.



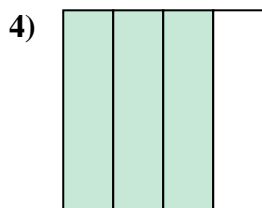
- A. two-fourths
B. one-half
C. two-halves



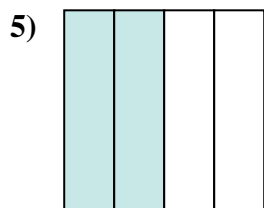
- A. two-halves
B. four-fourths
C. three-quarters



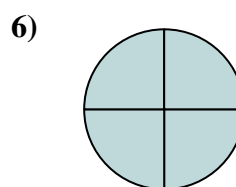
- A. one-quarter
B. three-fourths
C. two-quarters



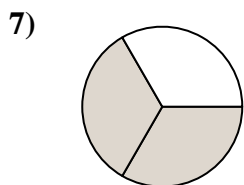
- A. one-fourth
B. three-quarters
C. two-fourths



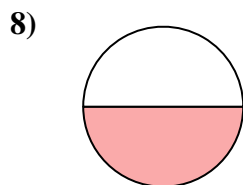
- A. two-quarters
B. three-fourths
C. two-halves



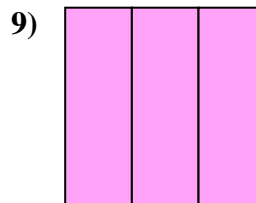
- A. four-quarters
B. two-halves
C. two-fourths



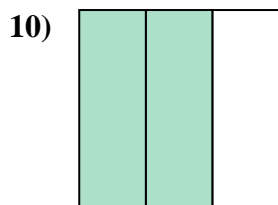
- A. one-quarter
B. two-halves
C. two-thirds



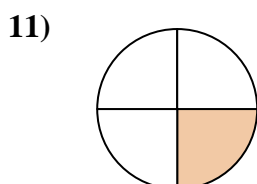
- A. four-fourths
B. two-halves
C. one-half



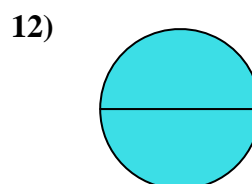
- A. one-half
B. three-thirds
C. four-quarters



- A. two-halves
B. two-thirds
C. three-fourths



- A. four-quarters
B. three-fourths
C. one-quarter



- A. two-halves
B. one-quarter
C. one-half

Answers

1. **B**
2. **A**
3. **C**
4. **B**
5. **A**
6. **A**
7. **C**
8. **C**
9. **B**
10. **B**
11. **C**
12. **A**