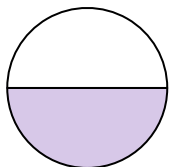


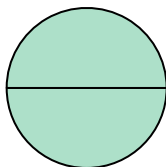
**Determine which letter best describes the shaded portion.****Answers**

1)




- A. one-half
B. two-halves
C. one-quarter

2)



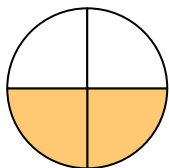
- A. two-halves
B. four-quarters
C. one-half

3)




- A. three-quarters
B. one-quarter
C. one-half

4)




- A. four-fourths
B. two-fourths
C. three-quarters

5)




- A. two-halves
B. one-fourth
C. three-thirds

6)



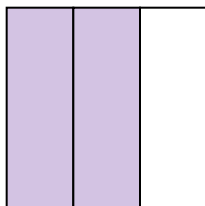
- A. one-half
B. two-halves
C. four-quarters

7)



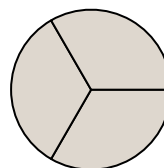
- A. four-fourths
B. three-quarters
C. one-fourth

8)



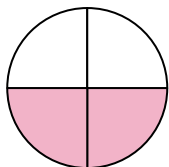
- A. four-fourths
B. one-half
C. two-thirds

9)



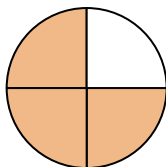
- A. one-quarter
B. two-fourths
C. three-thirds

10)



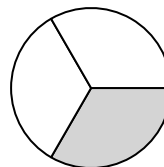
- A. four-quarters
B. two-fourths
C. three-quarters

11)



- A. four-fourths
B. one-half
C. three-quarters

12)



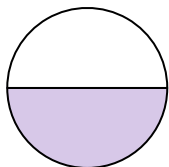
- A. one-half
B. one-third
C. two-fourths

1. _____
2. _____
3. _____
4. _____
5. _____
6. _____
7. _____
8. _____
9. _____
10. _____
11. _____
12. _____



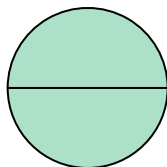
Determine which letter best describes the shaded portion.

1)




- A. one-half
B. two-halves
C. one-quarter

2)



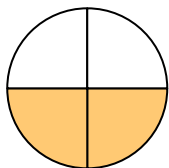
- A. two-halves
B. four-quarters
C. one-half

3)




- A. three-quarters
B. one-quarter
C. one-half

4)




- A. four-fourths
B. two-fourths
C. three-quarters

5)




- A. two-halves
B. one-fourth
C. three-thirds

6)



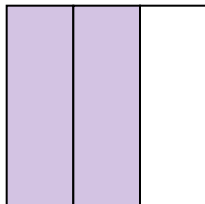
- A. one-half
B. two-halves
C. four-quarters

7)



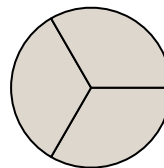
- A. four-fourths
B. three-quarters
C. one-fourth

8)



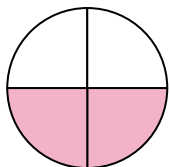
- A. four-fourths
B. one-half
C. two-thirds

9)



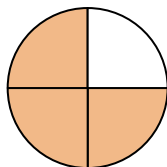
- A. one-quarter
B. two-fourths
C. three-thirds

10)



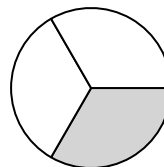
- A. four-quarters
B. two-fourths
C. three-quarters

11)



- A. four-fourths
B. one-half
C. three-quarters

12)



- A. one-half
B. one-third
C. two-fourths

Answers

1. **A**
2. **A**
3. **C**
4. **B**
5. **C**
6. **B**
7. **A**
8. **C**
9. **C**
10. **B**
11. **C**
12. **B**