




Measure the width and height of each block in inches and in centimeters.

Ex)



**Answers**

Ex. 1 1/2 1 3.8 2.5


1. \_\_\_\_\_

2. \_\_\_\_\_

3. \_\_\_\_\_

4. \_\_\_\_\_


1)



2)



3)




4)






Measure the width and height of each block in inches and in centimeters.

Ex)




1)




2)



3)



4)

**Answers**Ex. 1 1/2 1 3.8 2.51. 5 1/2 1 1/2 14 3.82. 3 1 1/2 7.6 3.83. 0 1/2 1 1/2 1.3 3.84. 3 1/2 0 1/2 8.9 1.3