


Solve each problem.

Answers


- 1) Victor spent \$10.46 buying some new toys. He bought them using a twenty dollar bill. How much change should he get back?



- 2) Olivia bought a new board game for \$7.90. She gave the cashier a ten dollar bill. How much change should she get back?



- 3) At the book fair Oliver spent \$12.53 buying books. He gave the cashier a twenty dollar bill. How much change should he get back?



1. _____

2. _____

3. _____



Solve each problem.


- 1) Victor spent \$10.46 buying some new toys. He bought them using a twenty dollar bill. How much change should he get back?



- 2) Olivia bought a new board game for \$7.90. She gave the cashier a ten dollar bill. How much change should she get back?



- 3) At the book fair Oliver spent \$12.53 buying books. He gave the cashier a twenty dollar bill. How much change should he get back?

**Answers**

1. **C**
2. **C**
3. **C**