




Determine which choice best describes the coins in the order shown.

Answers

1)



- A. quarter, dime, penny, nickel
B. nickel, penny, quarter, dime
C. dime, nickel, penny, quarter
D. dime, quarter, penny, nickel

1. _____

2)



- A. quarter, dime, penny, nickel
B. dime, quarter, nickel, penny
C. penny, nickel, dime, quarter
D. nickel, quarter, dime, penny

2. _____

3)



- A. dime, penny, nickel, quarter
B. quarter, penny, nickel, dime
C. quarter, penny, dime, nickel
D. quarter, dime, penny, nickel

3. _____

4)



- A. quarter, nickel, penny, dime
B. penny, quarter, dime, nickel
C. penny, nickel, quarter, dime
D. quarter, dime, nickel, penny

4. _____


5)



- A. nickel, quarter, penny, dime
B. quarter, penny, nickel, dime
C. dime, nickel, quarter, penny
D. penny, quarter, dime, nickel

5. _____

6)



- A. penny, nickel, quarter, dime
B. penny, dime, quarter, nickel
C. quarter, penny, nickel, dime
D. nickel, penny, dime, quarter

6. _____

7)



- A. quarter, nickel, dime, penny
B. penny, nickel, dime, quarter
C. quarter, dime, nickel, penny
D. dime, nickel, penny, quarter

7. _____

8)



- A. nickel, penny, dime, quarter
B. quarter, penny, nickel, dime
C. quarter, nickel, dime, penny
D. nickel, quarter, penny, dime


8. _____



Determine which choice best describes the coins in the order shown.

Answers

1)



- A. quarter, dime, penny, nickel
B. nickel, penny, quarter, dime
C. dime, nickel, penny, quarter
D. dime, quarter, penny, nickel

1. **A**

2)



- A. quarter, dime, penny, nickel
B. dime, quarter, nickel, penny
C. penny, nickel, dime, quarter
D. nickel, quarter, dime, penny

2. **C**

3)



- A. dime, penny, nickel, quarter
B. quarter, penny, nickel, dime
C. quarter, penny, dime, nickel
D. quarter, dime, penny, nickel

3. **A**

4)



- A. quarter, nickel, penny, dime
B. penny, quarter, dime, nickel
C. penny, nickel, quarter, dime
D. quarter, dime, nickel, penny

4. **B**

5)



- A. nickel, quarter, penny, dime
B. quarter, penny, nickel, dime
C. dime, nickel, quarter, penny
D. penny, quarter, dime, nickel

5. **D**

6)



- A. penny, nickel, quarter, dime
B. penny, dime, quarter, nickel
C. quarter, penny, nickel, dime
D. nickel, penny, dime, quarter

6. **D**

7)



- A. quarter, nickel, dime, penny
B. penny, nickel, dime, quarter
C. quarter, dime, nickel, penny
D. dime, nickel, penny, quarter

7. **D**

8)



- A. nickel, penny, dime, quarter
B. quarter, penny, nickel, dime
C. quarter, nickel, dime, penny
D. nickel, quarter, penny, dime

8. **D**