




Solve each problem.


**Answers**

- 1) Which letter best shows -124?




1. \_\_\_\_\_

- 2) Which letter best shows -23?



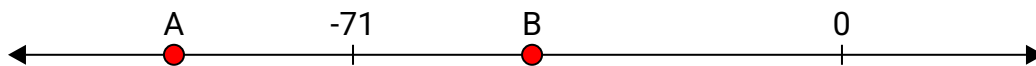
2. \_\_\_\_\_

- 3) Which letter best shows -103?



3. \_\_\_\_\_

- 4) Which letter best shows -45?




4. \_\_\_\_\_

- 5) Which letter best shows -57?



5. \_\_\_\_\_

- 6) Which letter best shows -92?



6. \_\_\_\_\_

- 7) Which letter best shows -123?



7. \_\_\_\_\_

- 8) Which letter best shows -98?




8. \_\_\_\_\_

- 9) Which letter best shows -58?



9. \_\_\_\_\_

- 10) Which letter best shows -25?



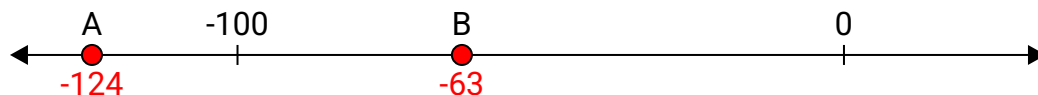
10. \_\_\_\_\_




Solve each problem.

**Answers**


- 1) Which letter best shows -124?

1. **A**

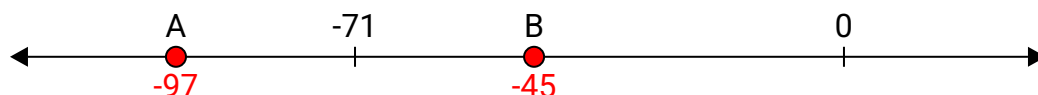
- 2) Which letter best shows -23?

2. **B**

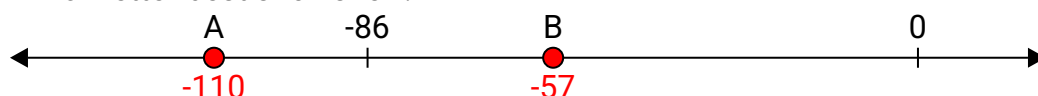
- 3) Which letter best shows -103?

3. **A**

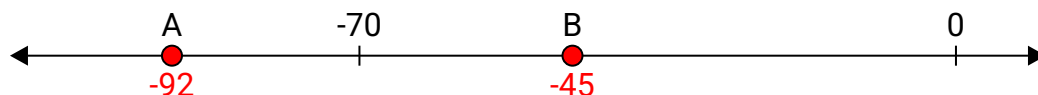
- 4) Which letter best shows -45?

4. **B**

- 5) Which letter best shows -57?

5. **B**


- 6) Which letter best shows -92?

6. **A**

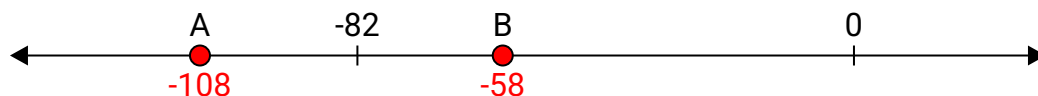
- 7) Which letter best shows -123?

7. **A**

- 8) Which letter best shows -98?

8. **A**

- 9) Which letter best shows -58?

9. **B**

- 10) Which letter best shows -25?

10. **B**