




Solve each problem.

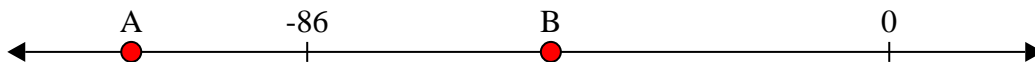
**Answers**

- 1) Which letter best shows -45?




1. \_\_\_\_\_

- 2) Which letter best shows -50?




2. \_\_\_\_\_

- 3) Which letter best shows -13?




3. \_\_\_\_\_

- 4) Which letter best shows -80?




4. \_\_\_\_\_

- 5) Which letter best shows -100?



5. \_\_\_\_\_

- 6) Which letter best shows -12?




6. \_\_\_\_\_

- 7) Which letter best shows -73?




7. \_\_\_\_\_

- 8) Which letter best shows -26?




8. \_\_\_\_\_

- 9) Which letter best shows -44?



9. \_\_\_\_\_

- 10) Which letter best shows -26?



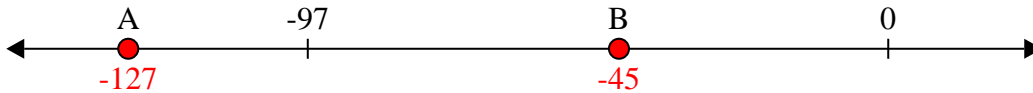
10. \_\_\_\_\_



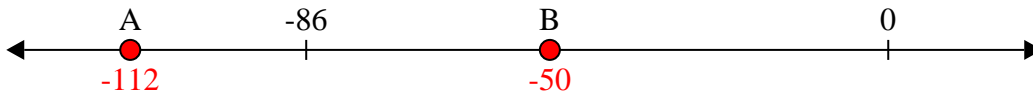
Solve each problem.

**Answers**

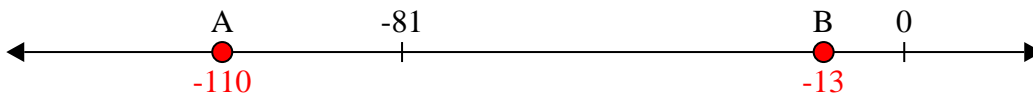
- 1) Which letter best shows -45?

1. **B**


- 2) Which letter best shows -50?

2. **B**


- 3) Which letter best shows -13?

3. **B**4. **A**


- 4) Which letter best shows -80?

5. **A**6. **B**


- 5) Which letter best shows -100?

7. **A**8. **B**


- 6) Which letter best shows -12?

9. **B**10. **B**

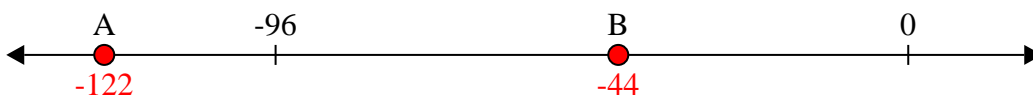
- 7) Which letter best shows -73?



- 8) Which letter best shows -26?



- 9) Which letter best shows -44?



- 10) Which letter best shows -26?

