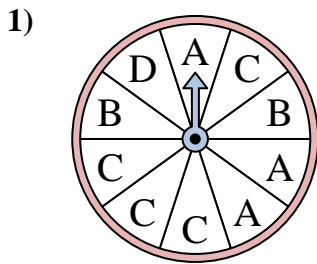
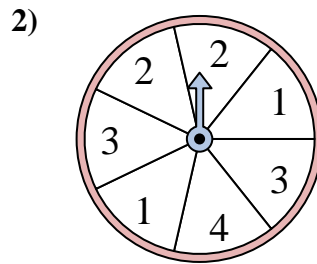




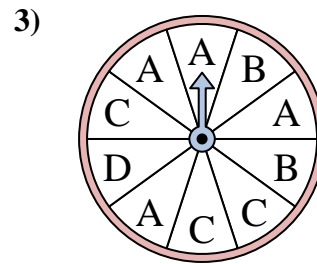
Solve each problem. Round your answer to the nearest tenth.

Answers

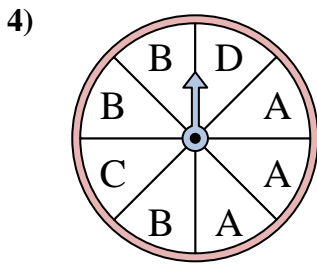
The spinner has a _____% chance of landing on a B.



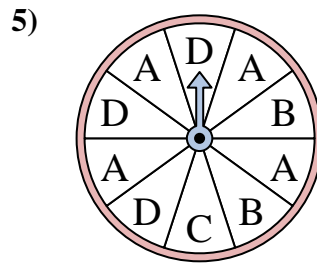
The spinner has a _____% chance of landing on a 2.



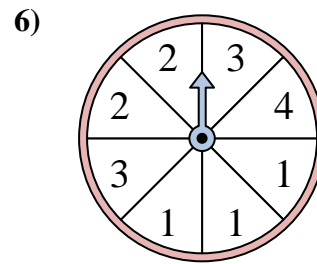
The spinner has a _____% chance of landing on a B.



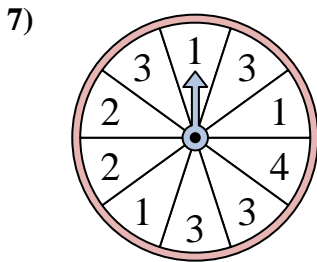
The spinner has a _____% chance of landing on a C.



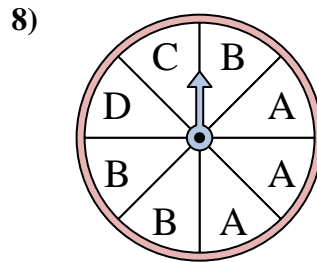
The spinner has a _____% chance of landing on a A.



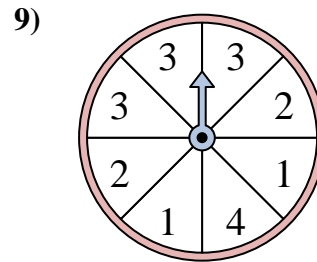
The spinner has a _____% chance of landing on a 2.



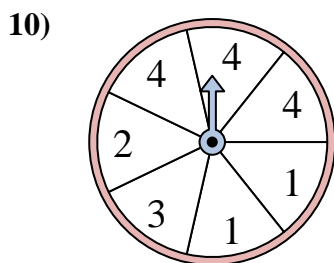
The spinner has a _____% chance of landing on a 1.



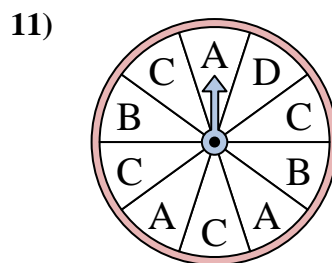
The spinner has a _____% chance of landing on a B.



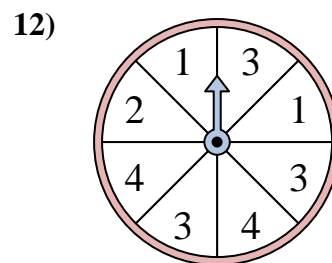
The spinner has a _____% chance of landing on a 2.



The spinner has a _____% chance of landing on a 3.



The spinner has a _____% chance of landing on a A.

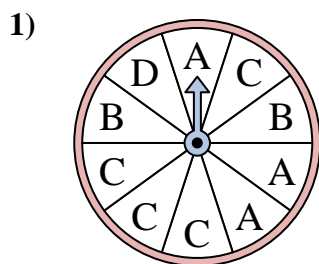


The spinner has a _____% chance of landing on a 4.

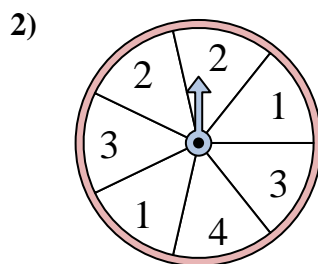
1. _____
2. _____
3. _____
4. _____
5. _____
6. _____
7. _____
8. _____
9. _____
10. _____
11. _____
12. _____



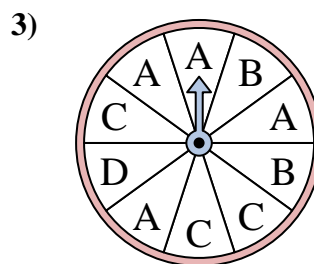
Solve each problem. Round your answer to the nearest tenth.



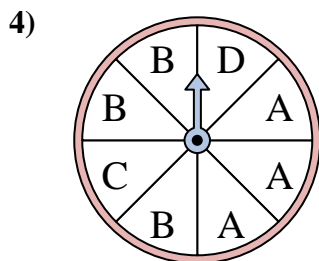
The spinner has a _____% chance of landing on a B.



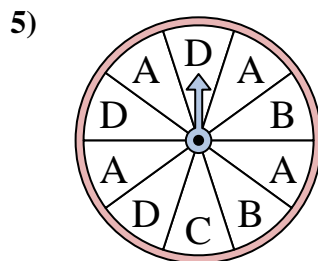
The spinner has a _____% chance of landing on a 2.



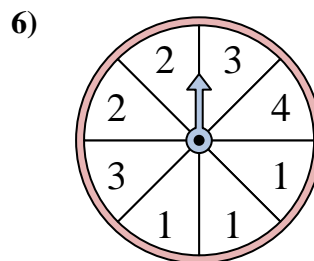
The spinner has a _____% chance of landing on a B.



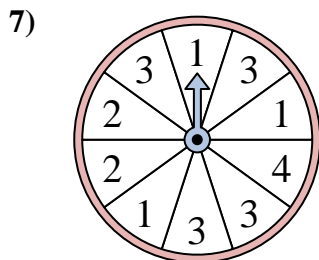
The spinner has a _____% chance of landing on a C.



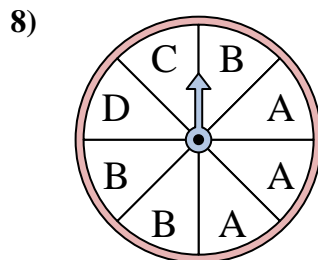
The spinner has a _____% chance of landing on a A.



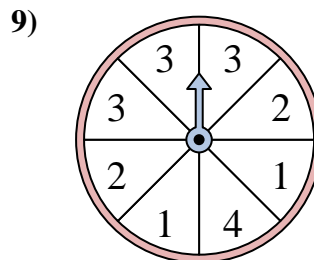
The spinner has a _____% chance of landing on a 2.



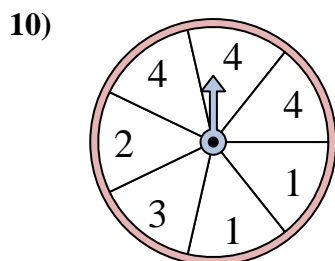
The spinner has a _____% chance of landing on a 1.



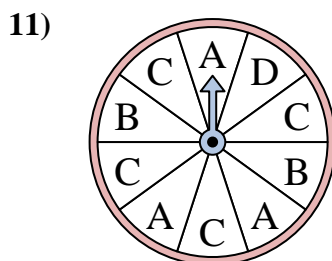
The spinner has a _____% chance of landing on a B.



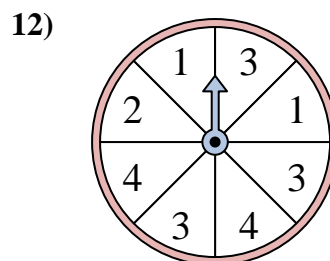
The spinner has a _____% chance of landing on a 2.



The spinner has a _____% chance of landing on a 3.



The spinner has a _____% chance of landing on a A.



The spinner has a _____% chance of landing on a 4.

Answers

1. **20**
2. **28.6**
3. **20**
4. **12.5**
5. **40**
6. **25**
7. **30**
8. **37.5**
9. **25**
10. **14.3**
11. **30**
12. **25**