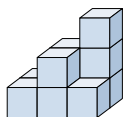




Solve each problem.

Answers

- 1) If you were looking at the 3d shape from the left side what would you see?



A.



B.



C.



D.



1. _____

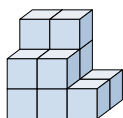
2. _____

3. _____

4. _____

5. _____

- 2) If you were looking at the 3d shape from the left side what would you see?



A.



B.



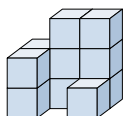
C.



D.



- 3) If you were looking at the 3d shape from the left side what would you see?



A.



B.



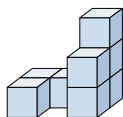
C.



D.



- 4) If you were looking at the 3d shape from the left side what would you see?



A.



B.



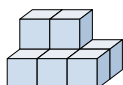
C.



D.



- 5) If you were looking at the 3d shape from the right side what would you see?



A.



B.



C.



D.

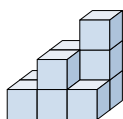




Solve each problem.

Answers

- 1) If you were looking at the 3d shape from the left side what would you see?



A.



B.



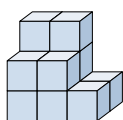
C.



D.

1. **A**

- 2) If you were looking at the 3d shape from the left side what would you see?



A.



B.



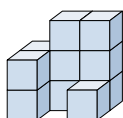
C.



D.

2. **A**3. **B**4. **A**5. **A**

- 3) If you were looking at the 3d shape from the left side what would you see?



A.



B.



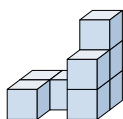
C.



D.



- 4) If you were looking at the 3d shape from the left side what would you see?



A.



B.



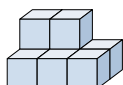
C.



D.



- 5) If you were looking at the 3d shape from the right side what would you see?



A.



B.



C.



D.

