

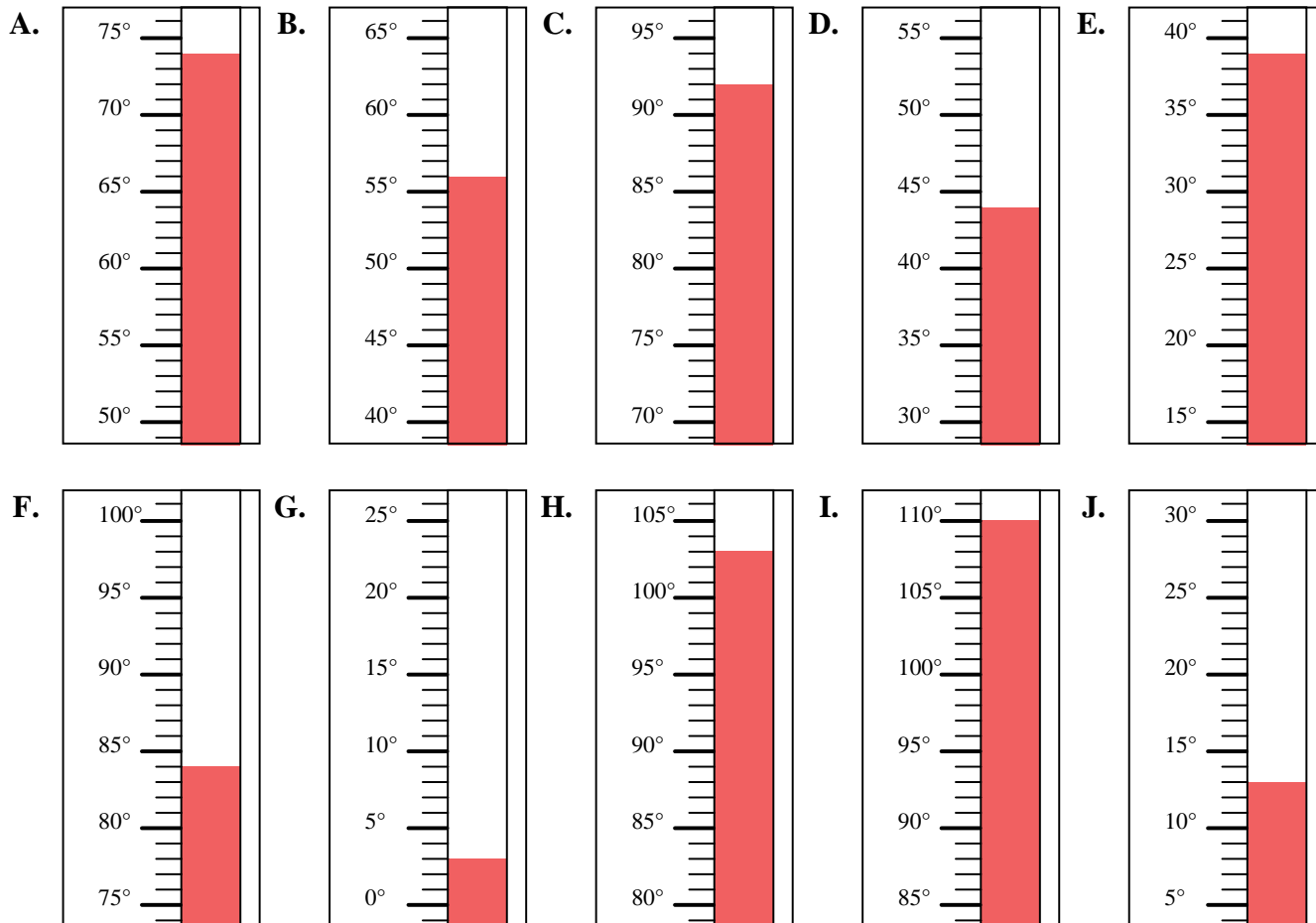


Determine which letter best answers each question.

Answers

- 1) Which thermometer best represents the temperature 92° ?
- 2) Which thermometer best represents the temperature 84° ?
- 3) Which thermometer best represents the temperature 56° ?
- 4) Which thermometer best represents the temperature 110° ?
- 5) Which thermometer best represents the temperature 13° ?
- 6) Which thermometer best represents the temperature 39° ?
- 7) Which thermometer best represents the temperature 3° ?
- 8) Which thermometer best represents the temperature 44° ?
- 9) Which thermometer best represents the temperature 74° ?
- 10) Which thermometer best represents the temperature 103° ?

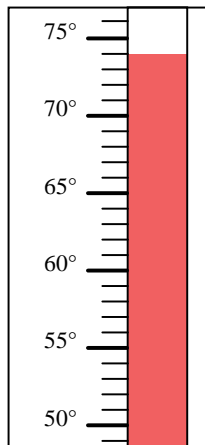
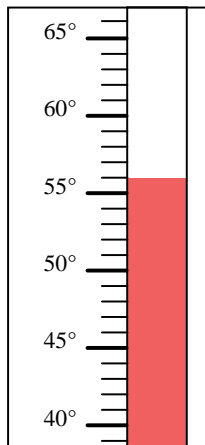
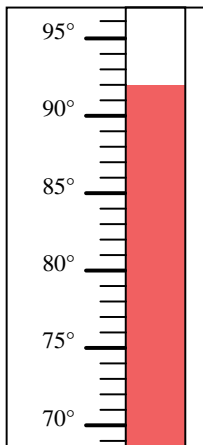
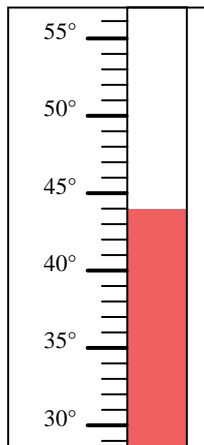
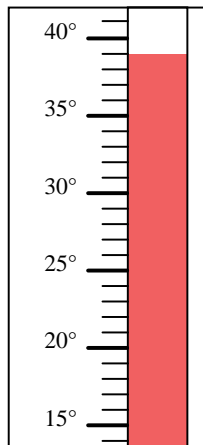
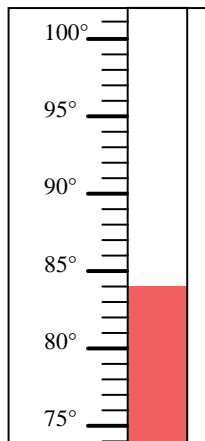
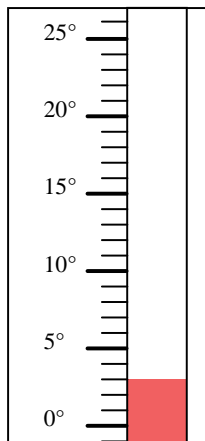
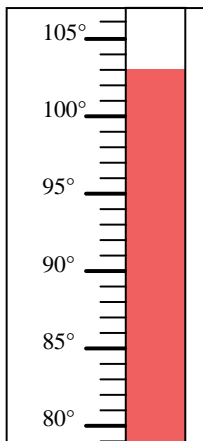
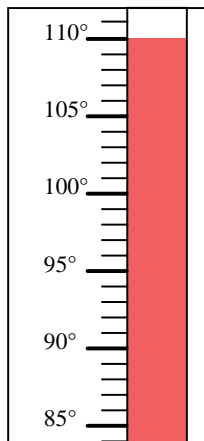
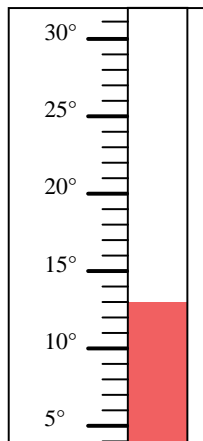
1. _____
2. _____
3. _____
4. _____
5. _____
6. _____
7. _____
8. _____
9. _____
10. _____





Determine which letter best answers each question.

- 1) Which thermometer best represents the temperature 92° ?
- 2) Which thermometer best represents the temperature 84° ?
- 3) Which thermometer best represents the temperature 56° ?
- 4) Which thermometer best represents the temperature 110° ?
- 5) Which thermometer best represents the temperature 13° ?
- 6) Which thermometer best represents the temperature 39° ?
- 7) Which thermometer best represents the temperature 3° ?
- 8) Which thermometer best represents the temperature 44° ?
- 9) Which thermometer best represents the temperature 74° ?
- 10) Which thermometer best represents the temperature 103° ?

A.**B.****C.****D.****E.****F.****G.****H.****I.****J.****Answers**

1. **C**
2. **F**
3. **B**
4. **I**
5. **J**
6. **E**
7. **G**
8. **D**
9. **A**
10. **H**