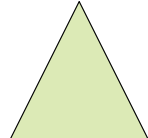
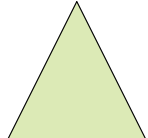
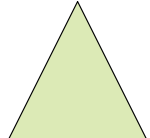

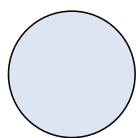




Count the number of shapes in each box.



Ex)



= 2

1)



= \_\_\_\_\_

2)






= \_\_\_\_\_

3)



= \_\_\_\_\_



4)



= \_\_\_\_\_

5)



= \_\_\_\_\_

6)





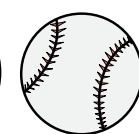






= \_\_\_\_\_

7)



= \_\_\_\_\_



8)



= \_\_\_\_\_

9)



= \_\_\_\_\_

10)



= \_\_\_\_\_

11)



= \_\_\_\_\_

