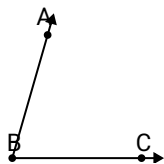




Solve each problem.

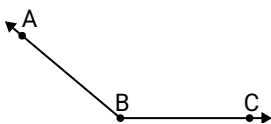
Answers

1)

Which choice best represents $\angle ABC$?

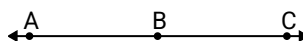
- A. 125°
- B. 74°
- C. 5°
- D. 180°

2)

Which choice best represents $\angle ABC$?

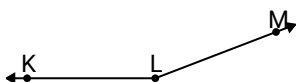
- A. 9°
- B. 140°
- C. 43°
- D. 173°

3)

Which choice best represents $\angle ABC$?

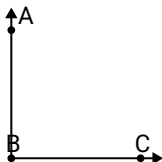
- A. 72°
- B. 180°
- C. 147°
- D. 9°

4)

Which choice best represents $\angle KLM$?

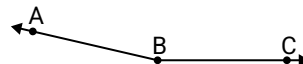
- A. 77°
- B. 27°
- C. 103°
- D. 159°

5)

Which choice best represents $\angle ABC$?

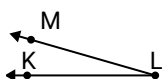
- A. 65°
- B. 35°
- C. 90°
- D. 3°

6)

Which choice best represents $\angle ABC$?

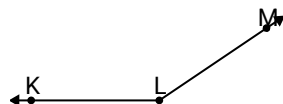
- A. 167°
- B. 12°
- C. 65°
- D. 140°

7)

Which choice best represents $\angle KLM$?

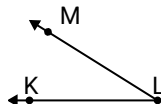
- A. 16°
- B. 74°
- C. 98°
- D. 132°

8)

Which choice best represents $\angle KLM$?

- A. 102°
- B. 67°
- C. 146°
- D. 4°

9)

Which choice best represents $\angle KLM$?

- A. 32°
- B. 156°
- C. 80°
- D. 134°

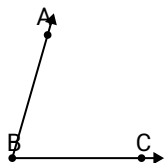
1. _____
2. _____
3. _____
4. _____
5. _____
6. _____
7. _____
8. _____
9. _____



Solve each problem.

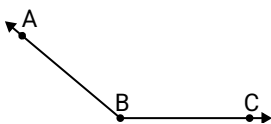
Answers

1)

Which choice best represents $\angle ABC$?

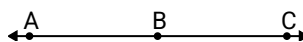
- A. 125°
- B. 74°
- C. 5°
- D. 180°

2)

Which choice best represents $\angle ABC$?

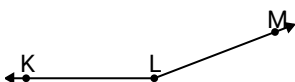
- A. 9°
- B. 140°
- C. 43°
- D. 173°

3)

Which choice best represents $\angle ABC$?

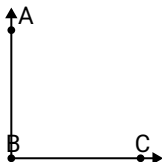
- A. 72°
- B. 180°
- C. 147°
- D. 9°

4)

Which choice best represents $\angle KLM$?

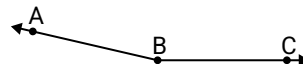
- A. 77°
- B. 27°
- C. 103°
- D. 159°

5)

Which choice best represents $\angle ABC$?

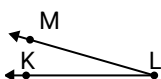
- A. 65°
- B. 35°
- C. 90°
- D. 3°

6)

Which choice best represents $\angle ABC$?

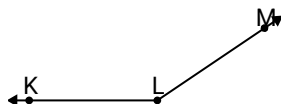
- A. 167°
- B. 12°
- C. 65°
- D. 140°

7)

Which choice best represents $\angle KLM$?

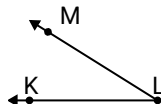
- A. 16°
- B. 74°
- C. 98°
- D. 132°

8)

Which choice best represents $\angle KLM$?

- A. 102°
- B. 67°
- C. 146°
- D. 4°

9)

Which choice best represents $\angle KLM$?

- A. 32°
- B. 156°
- C. 80°
- D. 134°

- 1. **B**
- 2. **B**
- 3. **B**
- 4. **D**
- 5. **C**
- 6. **A**
- 7. **A**
- 8. **C**
- 9. **A**